

Chapter 5

Two Degree of Freedom Systems

5.1 Equations of motion
$$\begin{aligned} m_1 \ddot{x}_1 + (k_1 + k_2)x_1 - k_2 x_2 &= 0 \\ m_2 \ddot{x}_2 + k_2 x_2 - k_2 x_1 &= 0 \end{aligned} \quad (E_1)$$

With $x_i(t) = X_i \cos(\omega t + \phi)$; $i = 1, 2$, Eqs. (E₁) give the frequency equation

$$\begin{vmatrix} -\omega^2 m_1 + k_1 + k_2 & -k_2 \\ -k_2 & -\omega^2 m_2 + k_2 \end{vmatrix} = 0$$

or
$$\omega^4 - \left(\frac{k_1 + k_2}{m_1} + \frac{k_2}{m_2} \right) \omega^2 + \frac{k_1 k_2}{m_1 m_2} = 0 \quad (E_2)$$

Roots of Eq. (E₂) are

$$\omega_1^2, \omega_2^2 = \frac{k_1 + k_2}{2m_1} + \frac{k_2}{2m_2} \mp \sqrt{\frac{1}{4} \left(\frac{k_1 + k_2}{m_1} + \frac{k_2}{m_2} \right)^2 - \frac{k_1 k_2}{m_1 m_2}} \quad (E_3)$$

If
$$\vec{X}^{(1)} = \begin{Bmatrix} X_1^{(1)} \\ X_2^{(1)} = r_1 X_1^{(1)} \end{Bmatrix} \quad \text{and} \quad \vec{X}^{(2)} = \begin{Bmatrix} X_1^{(2)} \\ X_2^{(2)} = r_2 X_1^{(2)} \end{Bmatrix},$$

$$r_1 = \frac{X_2^{(1)}}{X_1^{(1)}} = \frac{-m_1 \omega_1^2 + k_1 + k_2}{k_2} = \frac{k_2}{-m_2 \omega_1^2 + k_2} \quad (E_4)$$

$$r_2 = \frac{X_2^{(2)}}{X_1^{(2)}} = \frac{-m_1 \omega_2^2 + k_1 + k_2}{k_2} = \frac{k_2}{-m_2 \omega_2^2 + k_2} \quad (E_5)$$

General solution of (E₁) is

$$x_1(t) = X_1^{(1)} \cos(\omega_1 t + \phi_1) + X_1^{(2)} \cos(\omega_2 t + \phi_2) \quad (E_6)$$

$$x_2(t) = r_1 X_1^{(1)} \cos(\omega_1 t + \phi_1) + r_2 X_1^{(2)} \cos(\omega_2 t + \phi_2)$$

where $X_1^{(1)}$, $X_1^{(2)}$, ϕ_1 and ϕ_2 can be found using Eqs. (5.18).

For $m_1 = m$, $m_2 = 2m$, $k_1 = k$ and $k_2 = 2k$, (E₃) gives

$$\omega_1^2 = (2 - \sqrt{3}) \frac{k}{m}, \quad \omega_2^2 = (2 + \sqrt{3}) \frac{k}{m} \quad (E_7)$$

When $k = 1000 \text{ N/m}$ and $m = 20 \text{ kg}$,

$$\omega_1 = 3.6603 \text{ rad/sec} \quad \text{and} \quad \omega_2 = 13.6603 \text{ rad/sec}$$

$$r_1 = \frac{k_2}{-m_2 \omega_1^2 + k_2} = 1.36604, \quad r_2 = \frac{k_2}{-m_2 \omega_2^2 + k_2} = -0.36602$$

With $x_1(0) = 1$, $\dot{x}_1(0) = 0$, $x_2(0) = -1$ and $\dot{x}_2(0) = 0$, Eqs. (5.18)

give $x_1^{(1)} = -0.36602$, $x_1^{(2)} = -1.36603$, $\phi_1 = 0$, $\phi_2 = 0$

Response of the system is

$$x_1(t) = -0.36602 \cos 3.6603 t - 1.36603 \cos 13.6603 t$$

$$x_2(t) = -0.5 \cos 3.6603 t + 0.5 \cos 13.6603 t$$

5.2

Taking moments about O and mass m_1 ,

$$\begin{aligned} m_1 l_1^2 \ddot{\theta}_1 &= -W_1 (l_1 \sin \theta_1) + Q \sin \theta_2 (l_1 \cos \theta_1) \\ &\quad - Q \cos \theta_2 (l_1 \sin \theta_1) \\ &= -W_1 l_1 \theta_1 + W_2 l_1 (\theta_2 - \theta_1) \quad (E_1) \end{aligned}$$

assuming $Q \approx W_2$.

$$\begin{aligned} m_2 l_2^2 \ddot{\theta}_2 + m_2 l_2 (l_1 \ddot{\theta}_1) &= -W_2 (l_2 \sin \theta_2) \\ &= -W_2 l_2 \theta_2 \quad (E_2) \end{aligned}$$

Using the relations $\theta_1 = \frac{x_1}{l_1}$ and $\theta_2 = \frac{x_2 - x_1}{l_2}$,
Eqs. (E₁) and (E₂) become

$$m_1 l_1 \ddot{x}_1 + \left[W_1 + W_2 \left(\frac{l_1 + l_2}{l_2} \right) \right] x_1 - \frac{W_2 l_1}{l_2} x_2 = 0 \quad (E_3)$$

$$m_2 l_2 \ddot{x}_2 - W_2 x_1 + W_2 x_2 = 0 \quad (E_4)$$

When $m_1 = m_2 = m$, $l_1 = l_2 = l$ and $W_1 = W_2 = mg$, Eqs. (E₃) and (E₄) give

$$m l \ddot{x}_1 + 3 m g x_1 - m g x_2 = 0 \quad (E_5)$$

$$m l \ddot{x}_2 - m g x_1 + m g x_2 = 0$$

For harmonic motion $x_i(t) = X_i \cos \omega t$; $i = 1, 2$, Eqs. (E₅) become

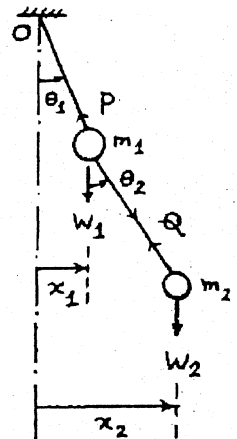
$$\begin{aligned} -\omega^2 m l X_1 + 3 m g X_1 - m g X_2 &= 0 \\ -\omega^2 m l X_2 - m g X_1 + m g X_2 &= 0 \end{aligned} \quad (E_6)$$

from which the frequency equation can be obtained as

$$\omega^4 m^2 l^2 - (4 m^2 l g) \omega^2 + 2 m^2 g^2 = 0$$

i.e. $\omega_1^2, \omega_2^2 = (2 \mp \sqrt{2}) \frac{g}{l}$

$$\therefore \omega_1 = 0.7654 \sqrt{\frac{g}{l}}, \quad \omega_2 = 1.8478 \sqrt{\frac{g}{l}}$$



Ratio of amplitudes is given by Eq. (E6) as

$$\frac{X_1}{X_2} = \frac{mg}{-\omega^2 ml + 3mg} = \frac{1}{(-\omega^2 \frac{l}{g} + 3)}$$

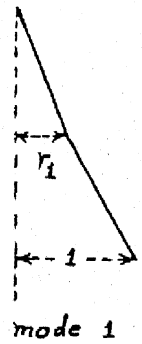
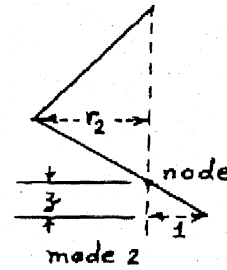
In mode 1, $\omega_1 = 0.7654 \sqrt{\frac{g}{l}}$, $r_1 = \left(\frac{X_1}{X_2}\right)^{(1)} = 0.4142$
No node.

In mode 2, $\omega_2 = 1.8478 \sqrt{\frac{g}{l}}$,

$$r_2 = \left(\frac{X_1}{X_2}\right)^{(2)} = -2.4133$$

one node located at z :

$$\frac{z}{l} = \frac{1 - r_2}{2.4133} \text{ or } z = 0.2930$$



5.3

Let R_1, R_2 and R_3 be the restoring forces in springs. Equations of motion of mass m in x and y directions are

$$m\ddot{x} = \sum_{i=1}^3 R_i \cos \alpha_i \quad (E_1)$$

$$m\ddot{y} = \sum_{i=1}^3 R_i \sin \alpha_i \quad (E_2)$$

$$\text{where } R_i = -k_i (x \cos \alpha_i + y \sin \alpha_i) \quad (E_3)$$

Eqs. (E1) to (E3) give

$$m\ddot{x} + \sum_{i=1}^3 k_i (x \cos^2 \alpha_i + y \sin \alpha_i \cos \alpha_i) = 0 \quad (E_4)$$

$$m\ddot{y} + \sum_{i=1}^3 k_i (x \sin \alpha_i \cos \alpha_i + y \sin^2 \alpha_i) = 0 \quad (E_5)$$

For $\alpha_1 = 45^\circ$, $\alpha_2 = 135^\circ$, $\alpha_3 = 270^\circ$ and $k_1 = k_2 = k_3 = k$, Eqs. (E4) and (E5) reduce to

$$m\ddot{x} + kx = 0 \quad (E_6)$$

$$m\ddot{y} + 2ky = 0 \quad (E_7)$$

These equations are uncoupled. For harmonic motion,

$x(t) = X \cos(\omega t + \phi)$, $y(t) = Y \cos(\omega t + \phi)$, and hence

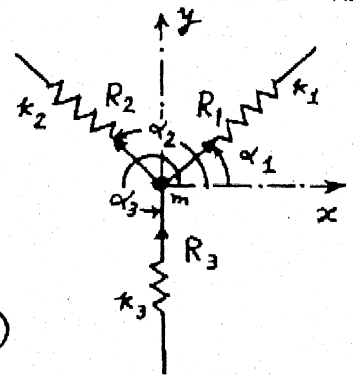
$$\omega_1 = \sqrt{\frac{k}{m}} \text{ for motion in } x \text{ direction}$$

$$\omega_2 = \sqrt{\frac{2k}{m}} \text{ for motion in } y \text{ direction}$$

Natural modes are given by $x(t) = X \cos\left(\sqrt{\frac{k}{m}} t + \phi_1\right)$

$$y(t) = Y \cos\left(\sqrt{\frac{2k}{m}} t + \phi_2\right)$$

where X, ϕ_1, Y and ϕ_2 can be determined from initial conditions.



5.4

Equations of motion in terms of x and θ :

$$m\ddot{x} + k_1(x - l_1\theta) + k_2(x + l_2\theta) = 0 \quad (E_1)$$

$$J_0\ddot{\theta} - k_1l_1(x - l_1\theta) + k_2l_2(x + l_2\theta) = 0 \quad (E_2)$$

For free vibration,

$$x(t) = X \cos(\omega t + \phi) \quad (E_3)$$

$$\theta(t) = \Theta \cos(\omega t + \phi) \quad (E_4)$$

and Eqs. (E₁) and (E₂) become

$$\begin{bmatrix} -m\omega^2 + k_1 + k_2 & -(k_1l_1 - k_2l_2) \\ -(k_1l_1 - k_2l_2) & -J_0\omega^2 + k_1l_1^2 + k_2l_2^2 \end{bmatrix} \begin{Bmatrix} X \\ \Theta \end{Bmatrix} = \begin{Bmatrix} 0 \\ 0 \end{Bmatrix} \quad (E_5)$$

Frequency equation is

$$\begin{vmatrix} -m\omega^2 + k_1 + k_2 & -(k_1l_1 - k_2l_2) \\ -(k_1l_1 - k_2l_2) & -J_0\omega^2 + k_1l_1^2 + k_2l_2^2 \end{vmatrix} = 0 \quad (E_6)$$

i.e.,

$$\begin{vmatrix} -\omega^2 + 5000 & 100 \\ 100 & -0.3\omega^2 + 2030 \end{vmatrix} = 0$$

i.e.,

$$0.3\omega^4 - 3530\omega^2 + 10.14 \times 10^6 = 0$$

i.e.,

$$\omega^2 = 6785.3373, \quad 4981.3293$$

$$\therefore \omega_1 = 70.5785 \text{ rad/sec}, \quad \omega_2 = 82.3732 \text{ rad/sec}$$

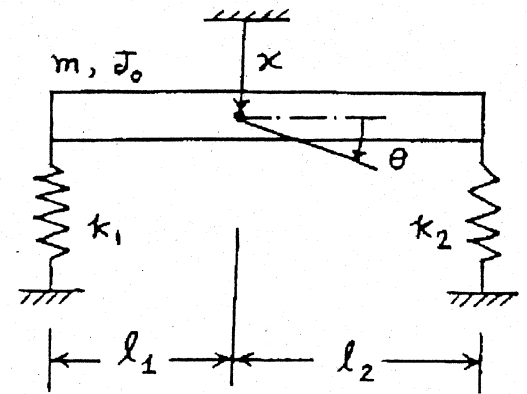
Mode shapes:

$$(-1000\omega_1^2 + 5 \times 10^6)X + 0.1 \times 10^6\Theta = 0$$

$$\text{or } \frac{X}{\Theta} \Big|_{\omega_1} = \frac{-0.1 \times 10^6}{-1000\omega_1^2 + 5 \times 10^6} = -5.3476$$

and

$$\frac{X}{\Theta} \Big|_{\omega_2} = \frac{-0.1 \times 10^6}{-1000\omega_2^2 + 5 \times 10^6} = 0.05601$$



5.5

$$k_1 = \text{stiffness of girder} = \frac{48EI}{l^3} = \frac{48(8(10^{12}))}{(30(12))^3} = 6.1728(10^8) \text{ lb/in}$$

$$k_2 = \text{stiffness of rope} = \frac{AE}{l} = \frac{A(30(10^6))}{(20)(12)} = 12.5(10^4) A \text{ lb/in}$$

$$m_1 = \text{mass of trolley} = 8000/386.4 = 20.7039 \text{ lb-sec}^2/\text{in}$$

$$m_2 = \text{mass of load} = 2000/386.4 = 5.1760 \text{ lb-sec}^2/\text{in}$$

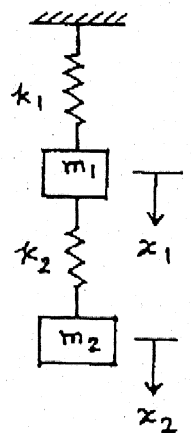
Desired frequency value: $\omega_1 > 20 \text{ Hz}$. Let $\omega_1 = 25 \text{ Hz} = 157.08 \text{ rad/sec}$ or $\omega_1^2 = 24674.1264 \text{ (rad/sec)}^2$.

Fundamental natural frequency is given by (see Eq. (E3) in solution of Problem 5.1):

$$\omega_1^2 = \frac{k_1 + k_2}{2 m_1} + \frac{k_2}{2 m_2} - \sqrt{\frac{1}{4} \left(\frac{k_1 + k_2}{m_1} + \frac{k_2}{m_2} \right)^2 - \frac{k_1 k_2}{m_1 m_2}} \quad (1)$$

Using the known values of k_1 , m_1 , and m_2 , a series of trial values of A are given and Eq. (1) is evaluated to find the corresponding values of ω_1^2 . The results are given in the table below. It can be seen that $A = 1.1 \text{ in}^2$ yields a frequency that satisfies the specification.

A (in ²)	k ₂ (lb/in)	ω ₁ ² (rad/sec) ²	ω ₁ (rad/sec)
0.6	0.7500 (10 ⁵)	0.1434 (10 ⁵)	119.7
0.7	0.8750 (10 ⁵)	0.1715 (10 ⁵)	131.0
0.8	0.1000 (10 ⁶)	0.1946 (10 ⁵)	139.5
0.9	0.1125 (10 ⁶)	0.2176 (10 ⁵)	147.5
1.0	0.1250 (10 ⁶)	0.2406 (10 ⁵)	155.1
1.1	0.1375 (10 ⁶)	0.2662 (10 ⁵)	163.2
1.2	0.1500 (10 ⁶)	0.2918 (10 ⁵)	170.8
1.3	0.1625 (10 ⁶)	0.3123 (10 ⁵)	176.7
1.4	0.1750 (10 ⁶)	0.3379 (10 ⁵)	183.8
1.5	0.1875 (10 ⁶)	0.3610 (10 ⁵)	190.0



5.6

$$k_1 = \frac{48 EI}{l^3} = \frac{48 (2.06 \times 10^{11}) (0.02)}{(40)^3} = 3.09 \times 10^6 \text{ N/m}$$

$$k_2 = 0.3 \times 10^6 \text{ N/m}, \quad m_1 = 1000 \text{ kg}, \quad m_2 = 5000 \text{ kg}$$

Eq. (E3) in the solution of problem 5.1 gives

$$\omega_1^2, \omega_2^2 = \frac{3.39 \times 10^6}{2000} + \frac{0.3 \times 10^6}{10000} \mp \sqrt{\frac{1}{4} \left(\frac{3.39 \times 10^6}{1000} + \frac{0.3 \times 10^6}{5000} \right)^2 - \frac{3.09 \times 0.3 \times 10^{12}}{5 \times 10^6}}$$

$$= (1.725 \mp 1.6704) 10^3$$

$$\omega_1 = 7.3892 \text{ rad/s}, \quad \omega_2 = 58.2701 \text{ rad/s}$$

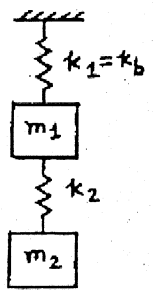
From Eqs. (E4) and (E5) of solution of problem 5.1,

$$r_1 = \frac{k_2}{-m_2 \omega_1^2 + k_2} = \frac{0.3 \times 10^6}{-5000 (54.6003) + 0.3 \times 10^6} = 11.1117$$

$$r_2 = \frac{k_2}{-m_2 \omega_2^2 + k_2} = \frac{0.3 \times 10^6}{-5000 (3395.4046) + 0.3 \times 10^6} = -0.01799$$

Mode shapes are

$$\vec{X}^{(1)} = \begin{Bmatrix} 1.0 \\ 11.1117 \end{Bmatrix} X_1^{(1)}, \quad \vec{X}^{(2)} = \begin{Bmatrix} 1.0 \\ -0.01799 \end{Bmatrix} X_1^{(2)}$$



5.7

Frequency equation:

$$\left| \left[-\omega^2 [m] + [k] \right] \right| = 0$$

or

$$\begin{vmatrix} (k_{11} - \omega^2 m_1) & k_{12} \\ k_{21} & (k_{22} - \omega^2 m_2) \end{vmatrix} = 0 \quad (1)$$

Expansion of the determinantal equation (1) gives:

$$(m_1 m_2) \omega^4 - (m_1 k_{22} + m_2 k_{11}) \omega^2 + (k_{11} k_{22} - k_{12}^2) = 0 \quad (2)$$

Roots of Eq. (2):

$$\omega_2^2, \omega_1^2 = \frac{(m_1 k_{22} + m_2 k_{11}) \pm \sqrt{(m_1 k_{22} - m_2 k_{11})^2 + 4 m_1 m_2 k_{12}^2}}{2 m_1 m_2} \quad (3)$$

Substitution of known expressions for k_{11} , k_{12} , and k_{22} into Eq. (3) yields:

$$\omega_2^2, \omega_1^2 = \frac{48}{7} \frac{EI}{m_1 m_2} \left[(m_1 + 8 m_2) \pm \sqrt{(m_1 - 8 m_2)^2 + 25 m_1 m_2} \right] \quad (4)$$

5.8

Equations of motion:

$$\left. \begin{aligned} m_1 \ddot{x}_1 + k_1 x_1 - k_1 x_2 &= 0 \\ m_2 \ddot{x}_2 + (k_1 + k_2) x_2 - k_1 x_1 &= 0 \end{aligned} \right\} (E_1)$$

$$\text{Let } x_i(t) = X_i \cos(\omega t + \phi); \quad (E_2)$$

$i = 1, 2$

Eq. (E₁) becomes

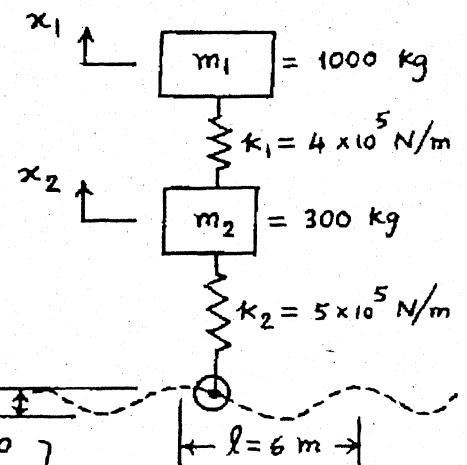
$$\begin{bmatrix} -m_1 \omega^2 + k_1 & -k_1 \\ -k_1 & -m_2 \omega^2 + k_1 + k_2 \end{bmatrix} \begin{Bmatrix} X_1 \\ X_2 \end{Bmatrix} = \begin{Bmatrix} 0 \\ 0 \end{Bmatrix}$$

Frequency equation is

$$\begin{vmatrix} -m_1 \omega^2 + k_1 & -k_1 \\ -k_1 & -m_2 \omega^2 + k_1 + k_2 \end{vmatrix} = 0$$

i.e.,

$$m_1 m_2 \omega^4 - (m_1 k_1 + m_2 k_2) \omega^2 - k_1 m_2 \omega^2 + k_1 k_2 = 0$$



i.e.,

$$\omega^2 = \left[(m_1 k_1 + m_1 k_2 + m_2 k_1) \pm \left(m_1^2 k_1^2 + m_1^2 k_2^2 + m_2^2 k_1^2 + 2 m_1^2 k_1 k_2 - 2 m_1 m_2 k_1 k_2 + 2 m_1 m_2 k_1^2 \right)^{\frac{1}{2}} \right] / 2 m_1 m_2 \quad (E_3)$$

Since $m_1 = 1000 \text{ kg}$, $m_2 = 300 \text{ kg}$, $k_1 = 4 \times 10^5 \text{ N/m}$ and $k_2 = 5 \times 10^5 \text{ N/m}$,

Eq. (E₃) gives

$$\omega_1 = 14.4539 \text{ rad/sec}, \quad \omega_2 = 56.4897 \text{ rad/sec}$$

$$f_1 = \frac{14.4539}{2\pi} \quad H_z = \frac{s_1 (1000)}{3600} \left(\frac{1}{l} \right) = \frac{s_1}{21.6}$$

where $l = 6 \text{ m}$ and s_1 is in km/hr .

$$\therefore s_1 = \text{critical velocity \# 1} = \frac{14.4539 (21.6)}{2\pi} = 49.6887 \text{ km/hr}$$

$$f_2 = \frac{56.4897}{2\pi} \quad H_z = \frac{s_2 (1000)}{3600} \left(\frac{1}{l} \right) = \frac{s_2}{21.6}$$

$$\therefore s_2 = \text{critical velocity \# 2} = \frac{56.4897 (21.6)}{2\pi} = 194.1968 \text{ km/hr.}$$

5.9

Equations of motion for rotation about O and A give

$$\begin{aligned} m_1 l_1^2 \ddot{\theta}_1 &= -w_1 l_1 \sin \theta_1 + Q \sin \theta_2 (l_1 \cos \theta_1) - Q \cos \theta_2 (l_1 \sin \theta_1) \\ &= -w_1 l_1 \theta_1 + Q l_1 (\theta_2 - \theta_1) \\ &= -w_1 l_1 \theta_1 + w_2 l_1 (\theta_2 - \theta_1) \quad \text{---- (E}_1\text{)} \\ &\text{since } Q \approx w_2. \end{aligned}$$

$$\begin{aligned} m_2 l_2^2 \ddot{\theta}_2 + m_2 l_2 (l_1 \ddot{\theta}_1) &= -w_2 l_2 \sin \theta_2 \\ &= -w_2 l_2 \theta_2 \quad \text{---- (E}_2\text{)} \end{aligned}$$

For $m_1 = m_2 = m$ and $l_1 = l_2 = l$, Eqs. (E₁) and (E₂) become

$$m l \ddot{\theta}_1 + 2 m g \theta_1 - m g \theta_2 = 0$$

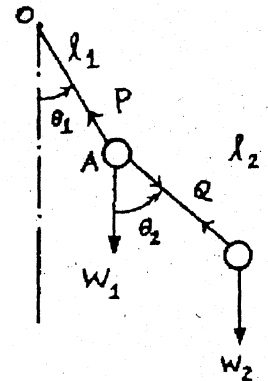
$$m l \ddot{\theta}_1 + m l \ddot{\theta}_2 + m g \theta_2 = 0$$

Assuming $\theta_i(t) = \Theta_i \cos(\omega t + \phi)$; $i = 1, 2$, we get

$$\begin{bmatrix} -\omega^2 m l + 2 m g & -m g \\ -\omega^2 m l & -\omega^2 m l + m g \end{bmatrix} \begin{Bmatrix} \Theta_1 \\ \Theta_2 \end{Bmatrix} = \begin{Bmatrix} 0 \\ 0 \end{Bmatrix} \quad \text{---- (E}_3\text{)}$$

Defining $\lambda = \frac{\omega^2 m l}{m g} = \frac{\omega^2 l}{g}$, frequency equation can be obtained as

$$\begin{vmatrix} -\lambda + 2 & -1 \\ -\lambda & -\lambda + 1 \end{vmatrix} = \lambda^2 - 4\lambda + 2 = 0$$

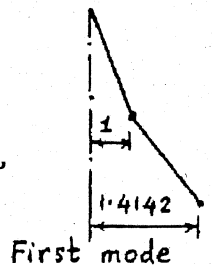


$$\lambda_1 = 2 - \sqrt{2} = 0.5858, \quad \lambda_2 = 2 + \sqrt{2} = 3.4142$$

$$\omega_1 = 0.7654 \sqrt{\frac{g}{l}}, \quad \omega_2 = 1.8478 \sqrt{\frac{g}{l}}$$

For ω_1 , first equation in (E₃) gives for $\theta_1 = 1$,

$$\theta_2 = -\lambda_1 + 2 = \sqrt{2} = 1.4142$$

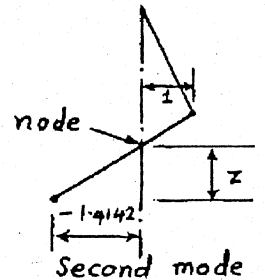


For ω_2 , first equation in (E₃) gives for $\theta_1 = 1$,

$$\theta_2 = -\lambda_2 + 2 = -\sqrt{2} = -1.4142$$

Location of node:

$$\frac{z}{1.4142} = \frac{1-z}{1} ; z = 0.4142$$



5.10

Eg. (E₃) in the solution of problem 5.1 gives

$$\omega_1^2, \omega_2^2 = \frac{k_1 + k_2}{2m_1} + \frac{k_2}{2m_2} \mp \sqrt{\frac{1}{4} \left(\frac{k_1 + k_2}{m_1} + \frac{k_2}{m_2} \right)^2 - \frac{k_1 k_2}{m_1 m_2}}$$

For $m_1 = m_2 = m$ and $k_1 = k_2 = k$, we get

$$\omega_1^2, \omega_2^2 = \frac{k}{m} + \frac{k}{2m} \mp \sqrt{\frac{1}{4} \left(\frac{3k}{m} \right)^2 - \frac{k^2}{m^2}} = \frac{3k}{2m} \mp \frac{k}{m} \sqrt{\frac{5}{4}}$$

$$\omega_1^2 = 0.382 \frac{k}{m}, \quad \omega_2^2 = 2.618 \frac{k}{m}$$

$$\omega_1 = 0.6181 \sqrt{\frac{k}{m}}, \quad \omega_2 = 1.6180 \sqrt{\frac{k}{m}}$$

Mode shapes are given by (see Eqs. (E₄) and (E₅) of problem 5.1)

$$r_1 = \frac{k_2}{-m_2 \omega_1^2 + k_2} = 1.6181 ; \quad \vec{X}^{(1)} = \begin{Bmatrix} 1 \\ 1.6181 \end{Bmatrix} X_1^{(1)}$$

$$r_2 = \frac{k_2}{-m_2 \omega_2^2 + k_2} = -0.6180 ; \quad \vec{X}^{(2)} = \begin{Bmatrix} 1 \\ -0.6180 \end{Bmatrix} X_1^{(2)}$$

5.11

For the system of Fig. 5.3(a),

$$\begin{aligned} \vec{X}^{(1)T} [m] \vec{X}^{(2)} &= \begin{Bmatrix} X_1^{(1)} & X_2^{(1)} \end{Bmatrix} \begin{bmatrix} m_1 & 0 \\ 0 & m_2 \end{bmatrix} \begin{Bmatrix} X_1^{(2)} \\ X_2^{(2)} \end{Bmatrix} = X_1^{(1)} X_1^{(2)} \{1 \quad r_1\} \begin{bmatrix} m_1 & 0 \\ 0 & m_2 \end{bmatrix} \begin{Bmatrix} 1 \\ r_2 \end{Bmatrix} \\ &= X_1^{(1)} X_1^{(2)} (m_1 + m_2 r_1 r_2) \end{aligned}$$

But

$$m_1 + m_2 r_1 r_2 = m_1 + m_2 \left(\frac{k_2}{-m_2 \omega_1^2 + k_2 + k_3} \right) \left(\frac{k_2}{-m_2 \omega_2^2 + k_2 + k_3} \right) \equiv \frac{N}{D}$$

where

$$N = m_1 (-m_2 \omega_1^2 + k_2 + k_3) (-m_2 \omega_2^2 + k_2 + k_3) + m_2 k_2^2, \text{ and}$$

$$D = (-m_2 \omega_1^2 + k_2 + k_3) (-m_2 \omega_2^2 + k_2 + k_3)$$

By substituting

$$\omega_1^2, \omega_2^2 = \frac{(k_1 + k_2)m_2 + (k_2 + k_3)m_1}{2m_1m_2} \mp \frac{1}{2} \left\{ \left[\frac{(k_1 + k_2)m_2 + (k_2 + k_3)m_1}{m_1m_2} \right]^2 - 4 \frac{(k_1 + k_2)(k_2 + k_3) - k_2^2}{m_1m_2} \right\}^{1/2}, \text{ we get}$$

$$\begin{aligned} N &= m_1m_2^2\omega_1^2\omega_2^2 - m_1m_2k_2\omega_2^2 - m_1m_2k_3\omega_2^2 - m_1m_2k_2\omega_1^2 \\ &\quad + m_1k_2^2 + m_1k_2k_3 - m_1m_2k_3\omega_1^2 + m_1k_2k_3 + m_1k_3^2 + m_2k_2^2 \\ &= m_1m_2^2 \left\{ \left[\frac{(k_1 + k_2)m_2 + (k_2 + k_3)m_1}{2m_1m_2} \right]^2 - \frac{1}{4} \left[\frac{(k_1 + k_2)m_2 + (k_2 + k_3)m_1}{m_1m_2} \right]^2 \right. \\ &\quad \left. - 4 \left(\frac{(k_1 + k_2)(k_2 + k_3) - k_2^2}{m_1m_2} \right) \right\} - m_1m_2k_2 \left\{ \frac{(k_1 + k_2)m_2 + (k_2 + k_3)m_1}{m_1m_2} \right\} \\ &\quad - m_1m_2k_3 \left\{ \frac{(k_1 + k_2)m_2 + (k_2 + k_3)m_1}{m_1m_2} \right\} + m_1k_2^2 + m_2k_2^2 + 2m_1k_2k_3 + m_1k_3^2 \\ &= 0 \end{aligned}$$

5.12 Eq. (5.10) gives

$$\begin{aligned} \omega_1^2, \omega_2^2 &= \frac{1}{2} \left\{ \frac{(800)1 + (700)2}{2} \right\} \mp \frac{1}{2} \left[\left\{ \frac{(800)1 + (700)2}{2} \right\}^2 - 4 \left\{ \frac{(800)(700) - (500)^2}{2} \right\} \right]^{1/2} \\ &= 550 \mp 384.0573 = 165.9427, 934.0573 \end{aligned}$$

$$\omega_1 = 12.8819 \text{ rad/s}, \quad \omega_2 = 30.5624 \text{ rad/s}$$

5.13 Eq. (E₃) in the solution of problem 5.1 gives

$$\omega_1^2, \omega_2^2 = \frac{8000}{2} + \frac{6000}{2} \mp \sqrt{\frac{1}{4} \left(\frac{8000}{1} + \frac{6000}{1} \right)^2 - \frac{12 \times 10^6}{1}} = 917.2, 13082.8$$

$$\omega_1 = 30.2853 \text{ rad/sec}, \quad \omega_2 = 114.3801 \text{ rad/s}$$

Eqs. (E₄) and (E₅) of solution of problem 5.1 give

$$r_1 = \frac{k_2}{-m_2\omega_1^2 + k_2} = \frac{6000}{-917.2 + 6000} = 1.1805; \quad \vec{X}^{(1)} = \begin{Bmatrix} 1 \\ 1.1805 \end{Bmatrix} X_1^{(1)}$$

$$r_2 = \frac{k_2}{-m_2\omega_2^2 + k_2} = \frac{6000}{-13082.8 + 6000} = -0.8471; \quad \vec{X}^{(2)} = \begin{Bmatrix} 1 \\ -0.8471 \end{Bmatrix} X_1^{(2)}$$

5.14 Same as example 5.1 with $m_1 = m_2 = 25 \text{ kg}$ and $k_1 = k_2 = k_3 = 50000 \text{ N/m}$

$$\omega_1 = \sqrt{\frac{k}{m}} = \sqrt{\frac{50000}{25}} = 44.7214 \text{ rad/s}$$

$$\omega_2 = \sqrt{\frac{3k}{m}} = \sqrt{\frac{150000}{25}} = 77.4597 \text{ rad/s}$$

General motion is given by Eq. (E₁₀) of Example 5.1:

$$x_1(t) = x_1^{(1)} \cos(44.7214t + \phi_1) + x_1^{(2)} \cos(77.4597t + \phi_2)$$

$$x_2(t) = x_1^{(1)} \cos(44.7214t + \phi_1) - x_1^{(2)} \cos(77.4597t + \phi_2)$$

5.15

Eq. (5.10) gives

$$\omega_1^2, \omega_2^2 = \frac{1}{2} \left\{ \frac{3000(2) + 4000(1)}{2} \right\} \mp \frac{1}{2} \left[\left\{ \frac{3000(2) + 4000(1)}{2} \right\}^2 - 4 \left\{ \frac{3000(4000) - 1000^2}{2} \right\} \right]^{\frac{1}{2}}$$

$$= 1633.9746, 3366.0254$$

$$\omega_1 = 40.4225 \text{ rad/s}, \quad \omega_2 = 58.0175 \text{ rad/s}$$

$$r_1 = \frac{k_2}{-m_2 \omega_1^2 + k_2 + k_3} = \frac{1000}{-2(1633.9746) + 4000} = 1.3660$$

$$r_2 = \frac{k_2}{-m_2 \omega_2^2 + k_2 + k_3} = \frac{1000}{-2(3366.0254) + 4000} = -0.3660$$

When $x_1(0) = x_2(0) = \dot{x}_2(0) = 0$ and $\dot{x}_1(0) = 20 \text{ m/s}$,

$$x_1^{(1)} = \frac{1}{(-0.366 - 1.366)} \left[\frac{+0.366(20)}{40.4225} \right] = -0.1046$$

$$x_1^{(2)} = \frac{1}{-1.732} \left[\frac{1.366(20)}{58.0175} \right] = -0.2719$$

$$\phi_1 = \phi_2 = \tan^{-1}(\infty) = \frac{\pi}{2}$$

Motion of the two masses is given by Eq. (5.15):

$$x_1(t) = 0.1046 \sin 40.4225t + 0.2719 \sin 58.0175t$$

$$x_2(t) = +(1.3660)(0.1046) \sin 40.4225t - (-0.3660)(-0.2719) \sin 58.0175t$$

$$= 0.1429 \sin 40.4225t - 0.09952 \sin 58.0175t$$

5.16

(a) $\omega_1^2 = 917.2$, $\omega_2^2 = 13082.8$, $r_1 = 1.1805$, $r_2 = -0.8471$

$$x_1(0) = 0.2, \quad x_2(0) = \dot{x}_1(0) = \dot{x}_2(0) = 0$$

Eq. (5.18) gives

$$x_1^{(1)} = \frac{1}{(-0.8471 - 1.1805)} [(-0.8471)(0.2)] = 0.08356$$

$$x_1^{(2)} = \frac{1}{(-0.8471 - 1.1805)} [(-1.1805)(0.2)] = 0.11644$$

$$\phi_1 = \phi_2 = \tan^{-1}(0) = 0$$

$$x_1(t) = 0.08356 \cos 30.2853t + 0.11644 \cos 114.3801t$$

$$x_2(t) = (1.1805)(0.08356) \cos 30.2853t + (-0.8471)(0.11644) \cos 114.3801t$$

$$= 0.09864 \cos 30.2853t - 0.09864 \cos 114.3801t$$

(b) $x_1(0) = 0.2$, $x_2(0) = \dot{x}_1(0) = 0$, $\dot{x}_2(0) = 5.0$

Eq. (5.18) gives

$$x_1^{(1)} = \frac{1}{-2.0276} \left[\{-0.8471(0.2)\}^2 + \frac{(5)^2}{917.2} \right]^{\frac{1}{2}} = -0.1167$$

$$x_1^{(2)} = \frac{1}{-2.0276} \left[\{-1.1805(0.2)\}^2 + \frac{(-5)^2}{13082.8} \right]^{1/2} = -0.1184$$

$$\phi_1 = \tan^{-1} \left\{ \frac{5.0}{30.2853(-0.8471)(0.2)} \right\} = \tan^{-1}(-0.9745) = 135.7399^\circ$$

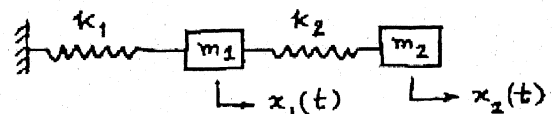
$$\phi_2 = \tan^{-1} \left\{ \frac{-5.0}{114.3801(-1.1805)(0.2)} \right\} = \tan^{-1}(0.1851) = 10.4895^\circ$$

$$x_1(t) = -0.1167 \cos(30.2853t + 135.7399^\circ) - 0.1184 \cos(114.3801t + 10.4895^\circ)$$

$$\begin{aligned} x_2(t) &= (1.1805)(-0.1167) \cos(30.2853t + 135.7399^\circ) \\ &\quad - 0.8471(-0.1184) \cos(114.3801t + 10.4895^\circ) \\ &= -0.1378 \cos(30.2853t + 135.7399^\circ) \\ &\quad + 0.1003 \cos(114.3801t + 10.4895^\circ) \end{aligned}$$

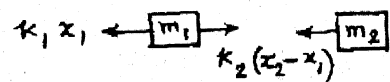
5.17

Equivalent system is shown in figure:



$$k_i = 2 \left(\frac{24 EI_i}{h_i^3} \right); \quad i = 1, 2$$

$$k_1 = k_2 = k = \frac{48 EI}{h^3}; \quad m_1 = 2m, \quad m_2 = m$$



Equations of motion: $m_1 \ddot{x}_1 + (k_1 + k_2)x_1 - k_2 x_2 = 0$

$$m_2 \ddot{x}_2 - k_2 x_1 + k_2 x_2 = 0$$

For harmonic motion $x_i(t) = X_i \cos(\omega t + \phi)$; $i = 1, 2$, we get

$$\begin{bmatrix} (-\omega^2 m_1 + k_1 + k_2) & -k_2 \\ -k_2 & (-\omega^2 m_2 + k_2) \end{bmatrix} \begin{Bmatrix} X_1 \\ X_2 \end{Bmatrix} = \begin{Bmatrix} 0 \\ 0 \end{Bmatrix} \quad \text{--- (E}_1\text{)}$$

Frequency equation is

$$\begin{vmatrix} (-\omega^2 m_1 + k_1 + k_2) & -k_2 \\ -k_2 & (-\omega^2 m_2 + k_2) \end{vmatrix} = 0$$

or $\omega^4 m_1 m_2 - \omega^2 (m_2 k_1 + m_2 k_2 + m_1 k_2) + k_1 k_2 = 0$

$$\omega^2 = \frac{(m_2 k_1 + m_2 k_2 + m_1 k_2) \pm \sqrt{(m_2 k_1 + m_2 k_2 + m_1 k_2)^2 - 4 m_1 m_2 k_1 k_2}}{2 m_1 m_2} \quad \text{--- (E}_2\text{)}$$

For given data,

$$\omega^2 = \frac{(mk + mk + 2mk) \pm \sqrt{(mk + mk + 2mk)^2 - 8m^2 k^2}}{4m^2} = \frac{k}{m} \left(1 \pm \frac{1}{\sqrt{2}} \right)$$

$$\omega_1 = 0.5412 \sqrt{\frac{k}{m}} = 3.7495 \sqrt{\frac{EI}{mh^3}}; \quad \omega_2 = 1.3066 \sqrt{\frac{k}{m}} = 9.0524 \sqrt{\frac{EI}{mh^3}}$$

From Eq. (E₁), we get

$$r_1 = \frac{x_2^{(1)}}{x_1^{(1)}} = \frac{-\omega_1^2 m_1 + k_1 + k_2}{k_2} = \frac{-2m\omega_1^2 + 2k}{k} = \frac{-2(0.2929k) + 2k}{k} = 1.4142$$

$$r_2 = \frac{x_2^{(2)}}{x_1^{(2)}} = \frac{-\omega_2^2 m_1 + k_1 + k_2}{k_2} = \frac{-2m\omega_2^2 + 2k}{k} = \frac{-2(1.7071k) + 2k}{k} = -1.4142$$

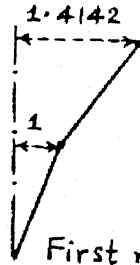
Mode shapes are:

$$\vec{x}^{(1)} = \begin{Bmatrix} 1.0 \\ 1.4142 \end{Bmatrix} x_1^{(1)}$$

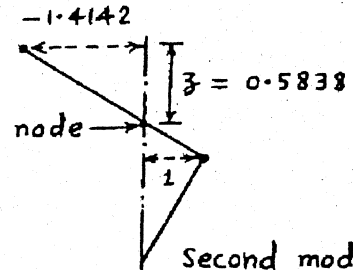
$$\vec{x}^{(2)} = \begin{Bmatrix} 1.0 \\ -1.4142 \end{Bmatrix} x_1^{(2)}$$

Location of node:

$$\frac{z}{1.4142} = \frac{1-z}{1} ; z = 0.5838$$



First mode
(no node)



Second mode
(one node)

5.18

Let P be the tension in the string. Horizontal components of tension (along x_1 direction) in the string lying above and below m_1 are

$$-\frac{x_1 P}{l_1} \text{ and } -\frac{(x_1 - x_2) P}{l_2}, \text{ respectively.}$$

Newton's second law gives

$$m_1 \ddot{x}_1 = -\frac{x_1 P}{l_1} - \frac{(x_1 - x_2) P}{l_2} \text{ or } m_1 \ddot{x}_1 + \frac{x_1 P}{l_1} + \frac{(x_1 - x_2) P}{l_2} = 0$$

Similarly

$$m_2 \ddot{x}_2 + \frac{x_2 P}{l_3} - \frac{(x_1 - x_2) P}{l_2} = 0$$

With $x_i(t) = X_i \cos(\omega t + \phi)$; $i=1,2$, and $l_1 = l_2 = l_3 = l$, $m_1 = m_2 = m$,

$$\begin{bmatrix} (-m\omega^2 + \frac{2P}{l}) & -\frac{P}{l} \\ -\frac{P}{l} & (-m\omega^2 + \frac{2P}{l}) \end{bmatrix} \begin{Bmatrix} X_1 \\ X_2 \end{Bmatrix} = \begin{Bmatrix} 0 \\ 0 \end{Bmatrix} \quad \text{--- (E}_1\text{)}$$

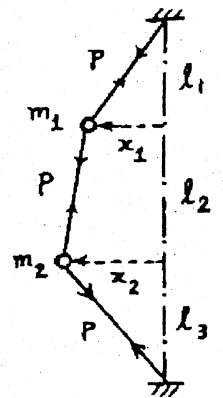
This gives the frequency equation

$$\left(-m\omega^2 + \frac{2P}{l}\right)^2 - \left(\frac{P}{l}\right)^2 = \left(-m\omega^2 + \frac{3P}{l}\right)\left(-m\omega^2 + \frac{P}{l}\right) = 0$$

$$\therefore \omega_1 = \sqrt{\frac{P}{ml}}, \quad \omega_2 = \sqrt{\frac{3P}{ml}}$$

From first of Eqs. (E₁),

$$r_1 = \frac{x_2^{(1)}}{x_1^{(1)}} = \frac{-m\omega_1^2 + \frac{2P}{l}}{\left(\frac{P}{l}\right)} = 1 ; \quad r_2 = \frac{x_2^{(2)}}{x_1^{(2)}} = \frac{-m\omega_2^2 + \frac{2P}{l}}{\left(\frac{P}{l}\right)} = -1$$



mode shapes are:

$$\vec{x}^{(1)} = \begin{Bmatrix} 1 \\ 1 \end{Bmatrix} X_1^{(1)}, \quad \vec{x}^{(2)} = \begin{Bmatrix} 1 \\ -1 \end{Bmatrix} X_1^{(2)}$$

No node

One node at middle of the two masses

5.19

For $m_1 = 3m$, $m_2 = m$, $k_1 = 3k$ and $k_2 = k$, Eq. (E₂) in solution of problem 5.17 gives

$$\omega^2 = \frac{(3mk + mk + 3mk) \pm \sqrt{(3mk + mk + 3mk)^2 - 36k^2m^2}}{6m^2} = \frac{k}{6m} (7 \pm \sqrt{13})$$

$$\omega^2 = 0.5657 \frac{k}{m}, \quad 1.7676 \frac{k}{m}$$

$$\omega_1 = 0.7521 \sqrt{\frac{k}{m}}, \quad \omega_2 = 1.3295 \sqrt{\frac{k}{m}}$$

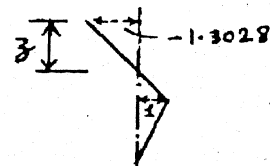
$$r_1 = \frac{X_2^{(1)}}{X_1^{(1)}} = \frac{-\omega_1^2 m_1 + k_1 + k_2}{k_2} = \frac{-0.5657(3) + 3 + 1}{1} = 2.3029$$

$$r_2 = \frac{X_2^{(2)}}{X_1^{(2)}} = \frac{-\omega_2^2 m_1 + k_1 + k_2}{k_2} = \frac{-1.7676(3) + 3 + 1}{1} = -1.3028$$

$$\vec{x}^{(1)} = \begin{Bmatrix} 1.0 \\ 2.3029 \end{Bmatrix} X_1^{(1)}, \quad \vec{x}^{(2)} = \begin{Bmatrix} 1.0 \\ -1.3028 \end{Bmatrix} X_1^{(2)}$$

No node

one node



$$\frac{z}{1.3028} = \frac{1-z}{1}; \quad z = 0.5657$$

5.20

$$k_1 = \frac{3EI}{b^3} = \frac{3E \left(\frac{1}{12} at^3 \right)}{b^3} = \frac{E a t^3}{4 b^3}$$

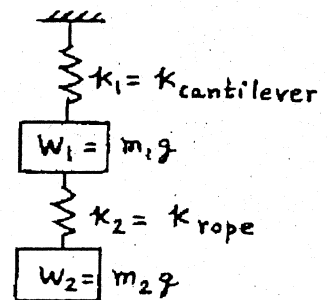
$$k_2 = \frac{AE}{l} = \frac{\pi d^2 E}{4l}$$

From problem 5.1,

$$\omega_{1,2}^2 = \frac{k_1 + k_2}{2m_1} + \frac{k_2}{2m_2} \mp \sqrt{\frac{1}{4} \left(\frac{k_1 + k_2}{m_1} + \frac{k_2}{m_2} \right)^2 - \frac{k_1 k_2}{m_1 m_2}}$$

$$= \left(\frac{E a t^3}{4 b^3} + \frac{\pi d^2 E}{4l} \right) \frac{g}{2W_1} + \frac{\pi d^2 E g}{8l W_2}$$

$$\mp \sqrt{\frac{1}{4} \left\{ \left(\frac{E a t^3}{4 b^3} + \frac{\pi d^2 E}{4l} \right) \frac{g}{W_1} + \frac{\pi d^2 E g}{4l W_2} \right\}^2 - \frac{E^2 a t^3 \pi d^2 g^2}{16 l b^3 W_1 W_2}}$$



5.21

From solution of Problem 5.1, we find that for $m_1 = m$, $m_2 = 2m$, $k_1 = k$ and $k_2 = 2k$,

$$\omega_1^2 = (2 - \sqrt{3}) \frac{k}{m}; \quad \omega_2^2 = (2 + \sqrt{3}) \frac{k}{m}$$

$$r_1 = \frac{X_2^{(1)}}{X_1^{(1)}} = \frac{-m_2 \omega_1^2 + k_2}{k_2} = \frac{1}{-1 + \sqrt{3}}$$

$$r_2 = \frac{X_2^{(2)}}{X_1^{(2)}} = \frac{k_2}{-m_2 \omega_2^2 + k_2} = \frac{1}{-1 - \sqrt{3}}$$

First mode shape:

$$\begin{Bmatrix} X_1^{(1)} \\ X_2^{(1)} \end{Bmatrix} = \begin{Bmatrix} X_1^{(1)} \cos(\omega_1 t + \phi_1) \\ r_1 X_1^{(1)} \cos(\omega_1 t + \phi_1) \end{Bmatrix} = \begin{Bmatrix} X_1^{(1)} \cos(\omega_1 t + \phi_1) \\ \left(\frac{X_1^{(1)}}{\sqrt{3} - 1} \right) \cos(\omega_1 t + \phi_1) \end{Bmatrix}$$

For the motion to be identical with the first normal mode, we need to have $X_1^{(2)} = 0$. This requires that (from Eq. (5.18)):

$$\frac{1}{r_2 - r_1} \left[\left\{ -r_1 x_1(0) + x_2(0) \right\}^2 + \frac{1}{\omega_2^2} \left\{ r_1 \dot{x}_1(0) - \dot{x}_2(0) \right\}^2 \right]^{\frac{1}{2}} = 0$$

or

$$\begin{aligned} x_2(0) &= r_1 x_1(0) = \frac{x_1(0)}{\sqrt{3} - 1} \\ \dot{x}_2(0) &= r_1 \dot{x}_1(0) = \frac{\dot{x}_1(0)}{\sqrt{3} - 1} \end{aligned}$$

5.22

Let $m_1 = m$, $m_2 = 2m$, $k_1 = k$, $k_2 = 2k$.

Initial conditions: $x_1(0) = 0$, $x_2(0) = 0.1 m$, $\dot{x}_1(0) = 0$, $\dot{x}_2(0) = 0$

Eqs. (5.18) yield:

$$\begin{aligned} X_1^{(1)} &= \frac{1}{r_2 - r_1} \left[(0 - 0.1)^2 \right]^{\frac{1}{2}} = \frac{0.1}{r_2 - r_1} = \frac{0.1}{\left[\frac{-1}{\sqrt{3} + 1} - \frac{1}{\sqrt{3} - 1} \right]} = -\frac{0.1}{\sqrt{3}} \\ X_1^{(2)} &= \frac{1}{r_2 - r_1} \left[(0.1)^2 \right]^{\frac{1}{2}} = \frac{0.1}{r_2 - r_1} = -\frac{0.1}{\sqrt{3}} \\ \phi_1 &= \tan^{-1}(0) = 0 \\ \phi_2 &= \tan^{-1}(0) = 0 \end{aligned}$$

where ω_1 and ω_2 are given by Eq. (E3) of solution of Problem 5.1.

Resulting motion:

$$\begin{aligned} x_1(t) &= X_1^{(1)} \cos(\omega_1 t + \phi_1) + X_1^{(2)} \cos(\omega_2 t + \phi_2) = -\frac{0.1}{\sqrt{3}} \left\{ \cos \omega_1 t + \cos \omega_2 t \right\} \\ x_2(t) &= r_1 X_1^{(1)} \cos(\omega_1 t + \phi_1) + r_2 X_1^{(2)} \cos(\omega_2 t + \phi_2) \\ &= \left[\frac{1}{\sqrt{3} - 1} \right] \left[-\frac{0.1}{\sqrt{3}} \right] \cos \omega_1 t + \left[-\frac{1}{\sqrt{3} + 1} \right] \left[-\frac{0.1}{\sqrt{3}} \right] \cos \omega_2 t \end{aligned}$$

$$= -\frac{0.1}{\sqrt{3}} \left[\left(\frac{1}{\sqrt{3}-1} \right) \cos \omega_1 t - \left(\frac{1}{\sqrt{3}+1} \right) \cos \omega_2 t \right]$$

5.23 $\omega_1^2 \geq (2\pi \times 10)^2 = 3947.8602 \text{ (rad/sec)}^2$

From solution of problem 5.20, this inequality can be expressed as:

$$\omega_1^2 = \left(\frac{E a t^3}{4 b^3} + \frac{\pi d^2 E}{4 l} \right) \frac{g}{2 W_1} + \frac{\pi d^2 E g}{8 l W_2}$$

$$- \sqrt{\left[\frac{1}{4} \left\{ \left(\frac{E a t^3}{4 b^3} + \frac{\pi d^2 E}{4 l} \right) W_1 + \frac{\pi d^2 E g}{4 l W_2} \right\}^2 - \frac{E^2 a t^3 \pi d^2 g^2}{16 l b^3 W_1 W_2} \right]}$$

$$\geq 3947.8602 \quad (E_1)$$

Data: $E = 30 \times 10^6 \text{ psi}$, $W_1 = 1000 \text{ lb}$, $W_2 = 500 \text{ lb}$, $g = 386.4 \text{ in/s}^2$,
 $b = 30 \text{ in}$, $l = 60 \text{ in}$.

Unknowns: a , t , d .

Let $a = 10 t$ and $d = t$.

For this data, t is incremented from 0.1 in in increments of 0.01 in and the left hand side of the inequality (E_1) is evaluated. This gives a value of $t = 1.54 \text{ in}$ for satisfying (E_1) .

\therefore Design is $t = 1.54''$, $d = t = 1.54''$, $a = 10 t = 15.4''$

5.24 With $k_{t1} = k_t$, $k_{t2} = 2 k_t$, $J_1 = J_0$, $J_2 = 2 J_0$, $k_{t3} = 0$ and $M_{t1} = M_{t2} = 0$, Eqs. (5.20) give

$$J_0 \ddot{\theta}_1 + 3 k_t \theta_1 - 2 k_t \theta_2 = 0$$

$$2 J_0 \ddot{\theta}_2 - 2 k_t \theta_1 + 2 k_t \theta_2 = 0$$

For harmonic solution, $\theta_i(t) = \Theta_i \cos(\omega t + \phi)$, $i = 1, 2$,

$$\begin{bmatrix} (-\omega^2 J_0 + 3 k_t) & -2 k_t \\ -2 k_t & (-2 \omega^2 J_0 + 2 k_t) \end{bmatrix} \begin{Bmatrix} \Theta_1 \\ \Theta_2 \end{Bmatrix} = \begin{Bmatrix} 0 \\ 0 \end{Bmatrix}$$

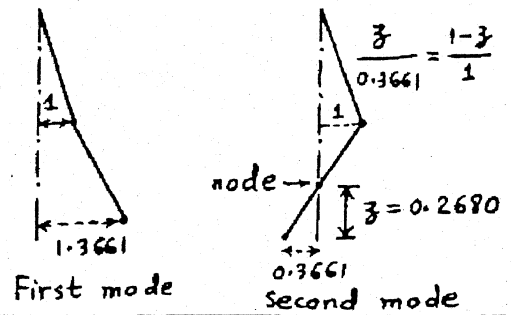
Frequency equation is

$$\begin{vmatrix} -\omega^2 J_0 + 3 k_t & -2 k_t \\ -2 k_t & -2 \omega^2 J_0 + 2 k_t \end{vmatrix} = 2 J_0^2 \omega^4 - 8 J_0 k_t \omega^2 + 2 k_t^2 = 0$$

$$\omega^2 = (2 \mp \sqrt{3}) \frac{k_t}{J_0} ; \quad \omega_1 = 0.5176 \sqrt{\frac{k_t}{J_0}}, \quad \omega_2 = 1.9319 \sqrt{\frac{k_t}{J_0}}$$

$$r_1 = \frac{\Theta_2^{(1)}}{\Theta_1^{(1)}} = \frac{-J_0 \omega_1^2 + 3k_t}{2k_t} = 1.3661$$

$$r_2 = \frac{\Theta_2^{(2)}}{\Theta_1^{(2)}} = \frac{-J_0 \omega_2^2 + 3k_t}{2k_t} = -0.3661$$



5.25

Equation of motion of mass m :

$$m \ddot{x} = -k_2 (x - r\theta) \quad \dots (E_1)$$

Equation of motion of cylinder of mass m_0 and mass moment of inertia $J_0 = \frac{1}{2} m_0 r^2$:

$$J_0 \ddot{\theta} = -k_1 r^2 \theta - k_2 (r\theta - x)r \quad \dots (E_2)$$

For $x(t) = X \cos(\omega t + \phi)$ and $\theta(t) = \Theta \cos(\omega t + \phi)$, Eqs. (E1) and (E2) give the frequency equation

$$\begin{vmatrix} -m\omega^2 + k_2 & -k_2 r \\ -k_2 r & -\frac{1}{2} m_0 r^2 \omega^2 + k_1 r^2 + k_2 r^2 \end{vmatrix} = 0$$

$$\text{i.e. } \omega^4 - \omega^2 \left(\frac{k_2}{m} + \frac{2\{k_1 + k_2\}}{m_0} \right) + \frac{2k_1 k_2}{m_0 m} = 0$$

$$\omega_1^2, \omega_2^2 = \frac{k_2}{2m} + \frac{(k_1 + k_2)}{m_0} \mp \sqrt{\frac{1}{4} \left(\frac{k_2}{m} + \frac{2k_1}{m_0} + \frac{2k_2}{m_0} \right)^2 - \frac{2k_1 k_2}{m m_0}}$$

5.26

For $J_1 = J_0$, $J_2 = 2J_0$, $k_{t1} = k_{t2} = k_{t3} = k_t$, and $M_{t1} = M_{t2} = 0$, Eqs. (5.20) give

$$J_0 \ddot{\theta}_1 + 2k_t \theta_1 - k_t \theta_2 = 0$$

$$2J_0 \ddot{\theta}_2 - k_t \theta_1 + 2k_t \theta_2 = 0$$

For harmonic motion, these equations give

$$\begin{bmatrix} -\omega^2 J_0 + 2k_t & -k_t \\ -k_t & -2\omega^2 J_0 + 2k_t \end{bmatrix} \begin{Bmatrix} \theta_1 \\ \theta_2 \end{Bmatrix} = \begin{Bmatrix} 0 \\ 0 \end{Bmatrix}$$

from which the frequency equation can be obtained as

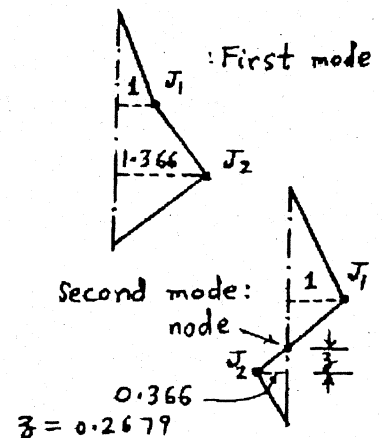
$$2J_0^2 \omega^4 - 6J_0 k_t \omega^2 + 3k_t^2 = 0$$

$$\omega_1^2, \omega_2^2 = \frac{1}{2} (3 \mp \sqrt{3}) \frac{k_t}{J_0}$$

$$\therefore \omega_1 = 0.79623 \sqrt{\frac{k_t}{J_0}}; \quad \omega_2 = 1.53819 \sqrt{\frac{k_t}{J_0}}$$

$$r_1 = \frac{\Theta_2^{(1)}}{\Theta_1^{(1)}} = \frac{-\omega_1^2 J_0 + 2k_t}{k_t} = 1.36603$$

$$r_2 = \frac{\Theta_2^{(2)}}{\Theta_1^{(2)}} = \frac{-\omega_2^2 J_0 + 2k_t}{k_t} = -0.36603$$



5.27

Eqs. (5.20) give

$$J_0 \ddot{\theta}_1 + 6k_t \theta_1 - 5k_t \theta_2 = 0$$

$$5J_0 \ddot{\theta}_2 - 5k_t \theta_1 + 5k_t \theta_2 = 0$$

These equations can be expressed as, for harmonic motion,

$$\begin{bmatrix} -\omega^2 J_0 + 6k_t & -5k_t \\ -5k_t & -5\omega^2 J_0 + 5k_t \end{bmatrix} \begin{Bmatrix} \theta_1 \\ \theta_2 \end{Bmatrix} = \begin{Bmatrix} 0 \\ 0 \end{Bmatrix}$$

Frequency equation is

$$J_0^2 \omega^4 - 7k_t J_0 \omega^2 + k_t^2 = 0$$

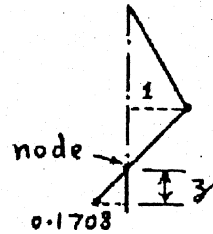
$$\omega_1^2, \omega_2^2 = \frac{k_t}{J_0} \left(\frac{7}{2} \mp \frac{1}{2} \sqrt{45} \right) = 0.1459 \frac{k_t}{J_0}, 6.8541 \frac{k_t}{J_0}$$

$$\omega_1 = 0.38197 \sqrt{\frac{k_t}{J_0}}, \quad \omega_2 = 2.61803 \sqrt{\frac{k_t}{J_0}}$$

$$r_1 = \frac{\theta_2^{(1)}}{\theta_1^{(1)}} = \frac{-\omega_1^2 J_0 + 6k_t}{5k_t} = 1.1708$$

$$r_2 = \frac{\theta_2^{(2)}}{\theta_1^{(2)}} = \frac{-\omega_2^2 J_0 + 6k_t}{5k_t} = -0.1708$$

First mode



Second mode

$$\frac{3}{0.1708} = \frac{1-3}{1}$$

$$3 = 0.1459$$

5.28

(i) Using $x(t)$ and $\theta(t)$:

For translatory motion:

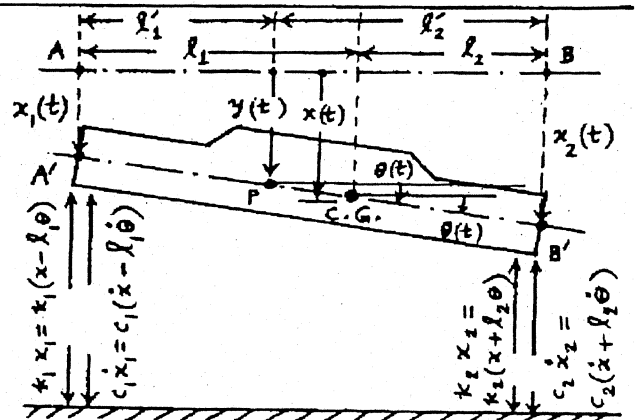
$$m \ddot{x} = -k_1(x-l_1\theta) - c_1(\dot{x}-l_1\dot{\theta}) - k_2(x+l_2\theta) - c_2(\dot{x}+l_2\dot{\theta}) \quad \dots (E_1)$$

For rotational motion about C.G.:

$$J_0 \ddot{\theta} = k_1(x-l_1\theta)l_1 + c_1(\dot{x}-l_1\dot{\theta})l_1 - k_2(x+l_2\theta)l_2 - c_2(\dot{x}+l_2\dot{\theta})l_2 \quad \dots (E_2)$$

Eqs. (E₁) and (E₂) can be rewritten as

$$\begin{bmatrix} m & 0 \\ 0 & J_0 \end{bmatrix} \begin{Bmatrix} \ddot{x} \\ \ddot{\theta} \end{Bmatrix} + \begin{bmatrix} c_1+c_2 & -c_1l_1+c_2l_2 \\ -c_1l_1+c_2l_2 & c_1l_1^2+c_2l_2^2 \end{bmatrix} \begin{Bmatrix} \dot{x} \\ \dot{\theta} \end{Bmatrix} + \begin{bmatrix} k_1+k_2 & -k_1l_1+k_2l_2 \\ -k_1l_1+k_2l_2 & k_1l_1^2+k_2l_2^2 \end{bmatrix} \begin{Bmatrix} x \\ \theta \end{Bmatrix} = \begin{Bmatrix} 0 \\ 0 \end{Bmatrix}$$



(ii) Using $y(t)$ and $\theta(t)$:

For translatory motion:

$$m\ddot{y} = -k_1(y - l_1'\theta) - c_1(\dot{y} - l_1'\dot{\theta}) - k_2(y + l_2'\theta) - c_2(\dot{y} + l_2'\dot{\theta}) - me\ddot{\theta} \quad \text{---- (E}_3\text{)}$$

For rotational motion:

$$J_p\ddot{\theta} = k_1(y - l_1'\theta)l_1' + c_1(\dot{y} - l_1'\dot{\theta})l_1' - k_2(y + l_2'\theta)l_2' - c_2(\dot{y} + l_2'\dot{\theta})l_2' - me\ddot{y} \quad \text{---- (E}_4\text{)}$$

Eqs. (E₃) and (E₄) can be rewritten as

$$\begin{bmatrix} m & me \\ me & J_p \end{bmatrix} \begin{Bmatrix} \ddot{y} \\ \ddot{\theta} \end{Bmatrix} + \begin{bmatrix} c_1 + c_2 & -c_1 l_1' + c_2 l_2' \\ -c_1 l_1' + c_2 l_2' & c_1 l_1'^2 + c_2 l_2'^2 \end{bmatrix} \begin{Bmatrix} \dot{y} \\ \dot{\theta} \end{Bmatrix} + \begin{bmatrix} k_1 + k_2 & -k_1 l_1' + k_2 l_2' \\ -k_1 l_1' + k_2 l_2' & k_1 l_1'^2 + k_2 l_2'^2 \end{bmatrix} \begin{Bmatrix} y \\ \theta \end{Bmatrix} = \begin{Bmatrix} 0 \\ 0 \end{Bmatrix}$$

5.29

For small angular deflections, equations of motion are

$$m_1 l_1^2 \ddot{\theta}_1 = -W_1 l_1 \sin \theta_1 + \kappa (l_2 \theta_2 - l_1 \theta_1) l_1 \cos \theta_1$$

$$m_2 l_2^2 \ddot{\theta}_2 = -W_2 l_2 \sin \theta_2 - \kappa (l_2 \theta_2 - l_1 \theta_1) l_2 \cos \theta_2$$

or

$$m_1 l_1^2 \ddot{\theta}_1 + \theta_1 (W_1 l_1 + \kappa l_1^2) - \kappa l_1 l_2 \theta_2 = 0$$

$$m_2 l_2^2 \ddot{\theta}_2 + \theta_2 (W_2 l_2 + \kappa l_2^2) - \kappa l_1 l_2 \theta_1 = 0$$

For harmonic motion,

$$\theta_i(t) = \Theta_i \cos(\omega t + \phi); \quad i = 1, 2, \text{ we get}$$

$$\begin{bmatrix} -\omega^2 m_1 l_1^2 + W_1 l_1 + \kappa l_1^2 & -\kappa l_1 l_2 \\ -\kappa l_1 l_2 & -\omega^2 m_2 l_2^2 + W_2 l_2 + \kappa l_2^2 \end{bmatrix} \begin{Bmatrix} \Theta_1 \\ \Theta_2 \end{Bmatrix} = \begin{Bmatrix} 0 \\ 0 \end{Bmatrix}$$

Frequency equation is

$$\omega^4 (m_1 m_2 l_1^2 l_2^2) - \omega^2 [m_2 l_2^2 (W_1 l_1 + \kappa l_1^2) + m_1 l_1^2 (W_2 l_2 + \kappa l_2^2)] + [W_1 l_1 W_2 l_2 + W_2 l_2 \kappa l_1^2 + W_1 l_1 \kappa l_2^2] = 0 \quad \text{---- (E}_1\text{)}$$

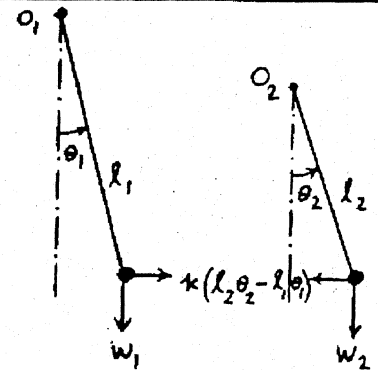
Roots of this equation give the natural frequencies ω_1 and ω_2 .

Amplitude ratios are given by

$$r_1 = \frac{\Theta_2^{(1)}}{\Theta_1^{(1)}} = \frac{-\omega_1^2 m_1 l_1^2 + W_1 l_1 + \kappa l_1^2}{\kappa l_1 l_2}$$

$$r_2 = \frac{\Theta_2^{(2)}}{\Theta_1^{(2)}} = \frac{-\omega_2^2 m_1 l_1^2 + W_1 l_1 + \kappa l_1^2}{\kappa l_1 l_2}$$

$$\text{where } W_1 = m_1 g, \quad W_2 = m_2 g.$$



5.30

Equations of motion:

$$4ml^2 \ddot{\theta} = -kl\theta \cdot l - k(l\theta + x)l$$

$$m\ddot{x} = -kx - k(l\theta + x)$$

i.e. $4ml^2 \ddot{\theta} + 2kl^2\theta + klx = 0$

$$m\ddot{x} + 2kx + kl\theta = 0$$

For harmonic motion, these equations give

$$\begin{bmatrix} -4ml^2\omega^2 + 2kl^2 & kl \\ kl & -m\omega^2 + 2k \end{bmatrix} \begin{Bmatrix} \theta \\ x \end{Bmatrix} = \begin{Bmatrix} 0 \\ 0 \end{Bmatrix}$$

Frequency equation is

$$4m^2\omega^4 - 10km\omega^2 + 3k^2 = 0$$

$$\omega^2 = \frac{k}{m} \left(\frac{5}{4} \mp \frac{\sqrt{13}}{4} \right) = 0.3486 \frac{k}{m}, \quad 2.1514 \frac{k}{m}$$

$$\omega_1 = 0.5904 \sqrt{\frac{k}{m}}, \quad \omega_2 = 1.4668 \sqrt{\frac{k}{m}}$$

Amplitude ratios are

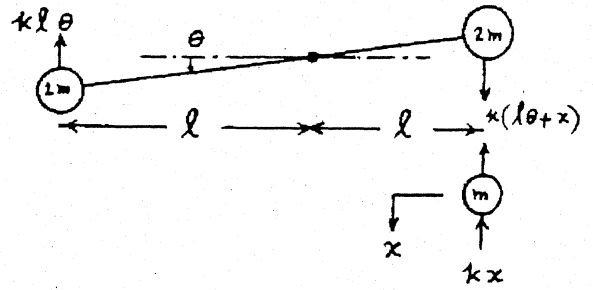
$$r_1 = \frac{x^{(1)}}{\theta^{(1)}} = \frac{-4ml^2\omega_1^2 + 2kl^2}{-kl} = -0.6056l$$

$$r_2 = \frac{x^{(2)}}{\theta^{(2)}} = \frac{-4ml^2\omega_2^2 + 2kl^2}{-kl} = 6.6056l$$

Mode shapes are

$$\vec{X}^{(1)} = \begin{Bmatrix} \theta^{(1)} \\ x^{(1)} \end{Bmatrix} = \begin{Bmatrix} 1 \\ -0.6056l \end{Bmatrix} \theta^{(1)}$$

$$\vec{X}^{(2)} = \begin{Bmatrix} \theta^{(2)} \\ x^{(2)} \end{Bmatrix} = \begin{Bmatrix} 1 \\ 6.6056l \end{Bmatrix} \theta^{(2)}$$



5.31

Equations of motion:

$$m(\ddot{x} - e\ddot{\theta}) = -kx$$

$$J_{CG} \ddot{\theta} = -k_t\theta - kxe$$

i.e. $m\ddot{x} + kx - me\ddot{\theta} = 0$

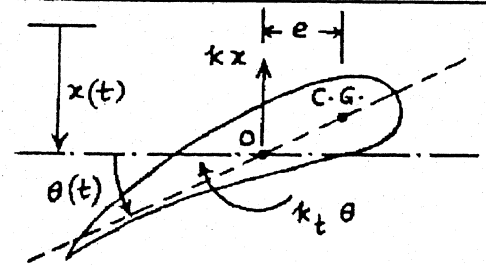
$$(J_0 - me^2) \ddot{\theta} + k_t\theta + kxe = 0$$

For harmonic motion, we get the frequency equation as

$$\begin{vmatrix} -m\omega^2 + k & me\omega^2 \\ ke & -(J_0 - me^2)\omega^2 + k_t \end{vmatrix} = 0$$

or $(J_0 - me^2)m\omega^4 - (J_0k + m k_t)\omega^2 + k k_t = 0$

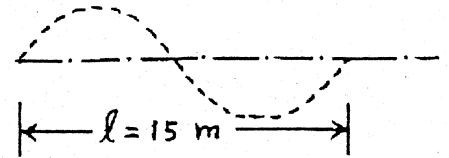
Roots of this equation give the natural frequencies of the system.



5.32 Speed becomes unfavorable when it is related to l as

$$v \tau_n = l$$

i.e., $v = \frac{l}{\tau_n} = l f_n = \frac{l \omega_n}{2\pi}$



Example 5.6 gives

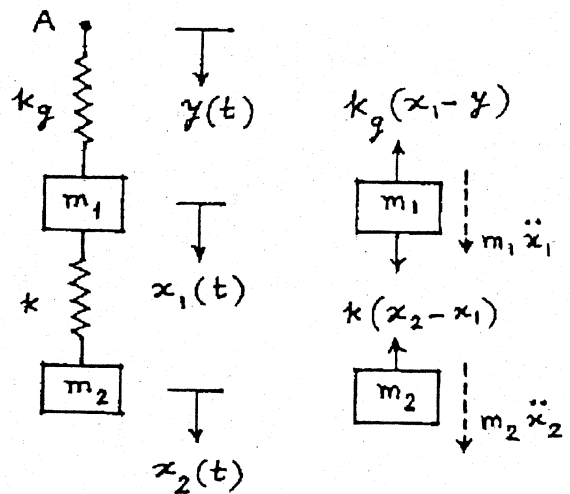
$$\omega_1 = 5.8593 \text{ rad/sec (bouncing)}$$

$$\omega_2 = 9.4341 \text{ rad/sec (pitching)}$$

$$\therefore v_1 = \frac{l \omega_1}{2\pi} = \frac{15 (5.8593)}{2\pi} = 13.9880 \text{ m/s (bouncing)}$$

$$v_2 = \frac{l \omega_2}{2\pi} = \frac{15 (9.4341)}{2\pi} = 22.5222 \text{ m/s (pitching)}$$

5.33



Equations of motion:

$$m_1 \ddot{x}_1 + (k_g + k) x_1 - k x_2 = k_g y$$

$$m_2 \ddot{x}_2 - k x_1 + k x_2 = 0$$

Free body diagrams of masses

Since velocity of crane in z-direction = 30 ft/min = 0.5 ft/sec, τ = time to complete one cycle = 10/0.5 = 20 sec, and $\omega = \frac{2\pi}{\tau} = \frac{2\pi}{20} = 0.31416 \text{ rad/sec}$.

Base motion for m_1 (girder motion due to unevenness of rails):

$$y(t) = Y \sin \omega t$$

where $Y = 2 \text{ in}$ and $\omega = 0.31416 \text{ rad/sec}$.

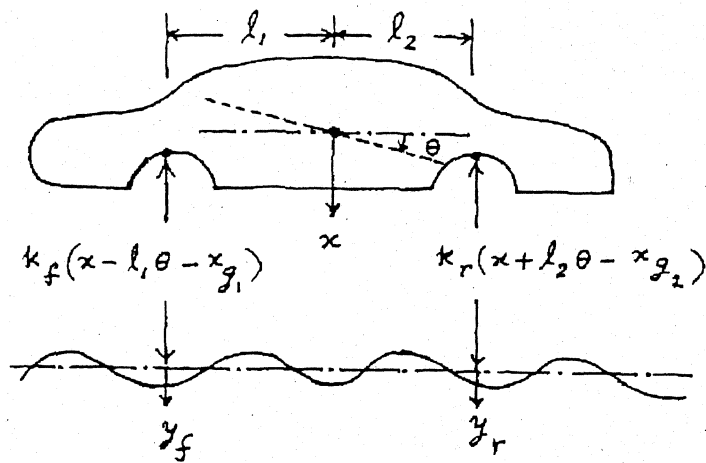
5.34

Road surface varies sinusoidally with amplitude, $Y = 0.05 \text{ m}$ and wavelength, $d = 10 \text{ m}$. If v = velocity of automobile (m/sec), time to travel one wave length = $\tau = d/v$ sec. $\tau = 10/v$ sec, $\omega = \frac{2\pi}{\tau} = \frac{2\pi v}{10} \text{ rad/sec}$.

$$v = 50 \text{ km/hr} = (50 (10^3)) / (60 (60)) = 13.8889 \text{ m/sec,}$$

$$J_0 = m r_g^2 = 1000 (0.9)^2 = 810 \text{ kg-m}^2.$$

Equations of motion:



y_f (y_r) = ground or base displacement
of front (rear) wheels, downwards

For motion along x :

$$m \ddot{x} + x (k_f + k_r) + \theta (k_r \ell_2 - k_f \ell_1) = k_f y_f + k_r y_r \quad (1)$$

For motion along θ :

$$J_0 \ddot{\theta} + x (\ell_2 k_r - \ell_1 k_f) + \theta (k_r \ell_2^2 + k_f \ell_1^2) = k_r \ell_2 y_r - k_f \ell_1 y_f \quad (2)$$

where the ground (base) motions can be expressed as

$$y_f(t) = Y \sin \omega t = 0.05 \sin \frac{2 \pi v}{10} t \text{ m} \quad (3)$$

$$y_r(t) = Y \sin (\omega t - \phi) = 0.05 \sin \left(\frac{2 \pi v}{10} t - \frac{2 \pi (\ell_1 + \ell_2)}{d} \right) \text{ m} \quad (4)$$

For given data, Eqs. (1) and (2) take the form:

$$1000 \ddot{x} + 40 (10^3) x + 15000 \theta = 900 \sin 8.7267 t + 1100 \sin (8.7267 t - 1.5708) \quad (5)$$

$$810 \ddot{\theta} + 15000 x + 67500 \theta = 1650 \sin (8.7267 t - 1.5708) - 900 \sin 8.7267 t \quad (6)$$

5.35 Natural frequencies are given by:

$$\left[-\omega^2 \begin{bmatrix} m_1 & 0 \\ 0 & m_2 \end{bmatrix} + \begin{bmatrix} k_{11} & k_{12} \\ k_{21} & k_{22} \end{bmatrix} \right] \begin{Bmatrix} X_1 \\ X_2 \end{Bmatrix} = \begin{Bmatrix} 0 \\ 0 \end{Bmatrix} \quad (1)$$

where $m_1 = \text{mass of pulley} = \frac{200}{386.4} \text{ lb-sec}^2/\text{in}$; $m_2 = \text{mass of motor} = \frac{500}{386.4} \text{ lb-sec}^2/\text{in}$

$X_1 = \text{amplitude of pulley}$, $X_2 = \text{amplitude of motor}$,

$$\frac{E I}{\rho^3} = \frac{(30 (10^8)) \left(\frac{\pi}{64} (2^4) \right)}{(90^3)} = 32.3210 \text{ lb/in}$$

Frequency equation becomes:

$$\begin{vmatrix} (-\omega^2 m_1 + k_{11}) & k_{12} \\ k_{12} & (-\omega^2 m_2 + k_{22}) \end{vmatrix} = 0$$

or

$$(m_1 m_2) \omega^4 - (k_{11} m_2 + k_{22} m_1) \omega^2 + (k_{11} k_{22} - k_{12}^2) = 0 \quad (2)$$

From known data, Eq. (2) can be expressed as:

$$0.6698 \omega^4 - 11563.2894 \omega^2 + 7.3108 (10^8) = 0 \quad (3)$$

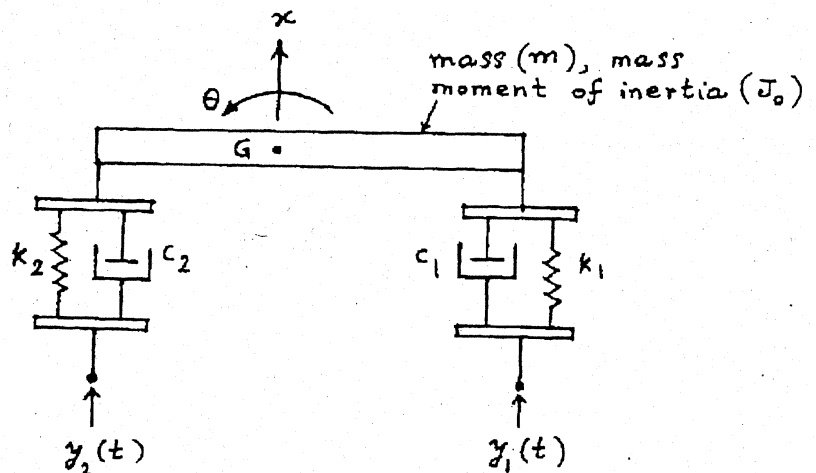
Roots of Eq. (3):

$$\omega^2 = 657.26642, 16606.5300 \quad (4)$$

or

$$\omega_1 = 25.6372 \text{ rad/sec}, \omega_2 = 128.8663 \text{ rad/sec}$$

5.36



1. Model the bicycle and the rider as a two d.o.f system as shown in figure.
2. Find the equivalent stiffness (k_1) and damping coefficient (c_1) of the front wheel in the vertical direction.
3. Find the equivalent stiffness (k_2) and damping coefficient (c_2), if applicable, of the rear wheel in the vertical direction.
4. Describe the road roughness under the wheels as $y_1(t)$ and $y_2(t)$.
5. Derive the equations of motion of the system subjected to base excitation.
6. Solve the resulting system of equations to find the steady state response.

5.37

(a)

Choose unknown coordinates as $x(t)$ and $\theta(t)$. Equations of motion:

$$m \ddot{x} = -k(x - \ell \theta/2) - 2k(x + \ell \theta/3) + F(t)$$

$$J_0 \ddot{\theta} = k(x - \ell \theta/2)(\ell/2) - 2k(x + \ell \theta/3)(\ell/3) + F(t)(\ell/3)$$

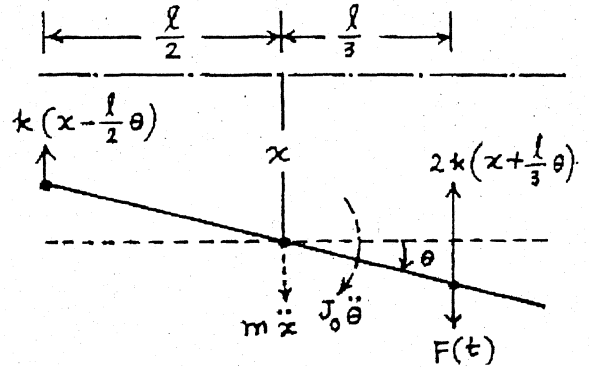
or

$$\begin{bmatrix} m & 0 \\ 0 & J_0 \end{bmatrix} \begin{Bmatrix} \ddot{x} \\ \ddot{\theta} \end{Bmatrix} + \begin{bmatrix} 3k & k\ell/6 \\ k\ell/6 & 17k\ell^2/36 \end{bmatrix} \begin{Bmatrix} x \\ \theta \end{Bmatrix} = \begin{Bmatrix} F(t) \\ \ell F(t)/3 \end{Bmatrix}$$

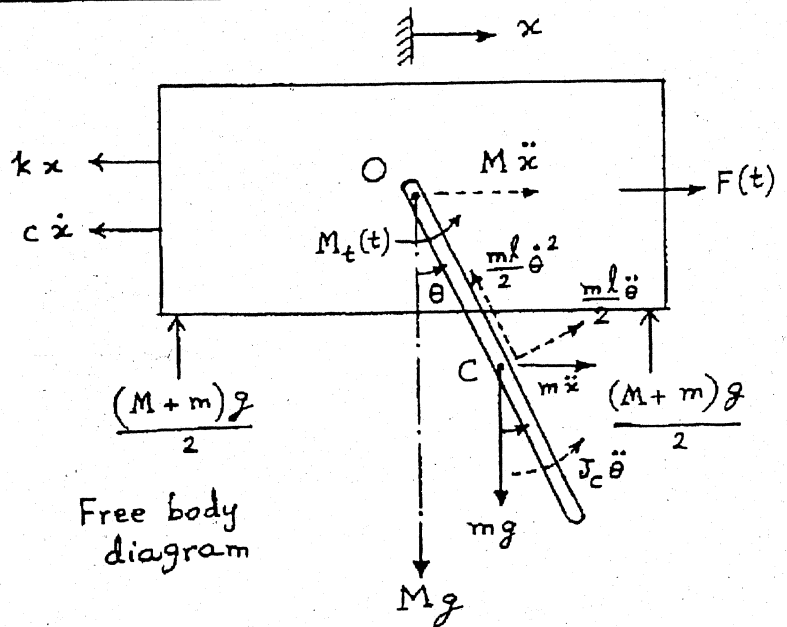
where $J_0 = \frac{m\ell^2}{12}$ and $F(t) = F_0 \sin \omega t$.

(b)

Elastic or static coupling.



5.38



Equations of motion with coordinates $x(t)$ and $\theta(t)$:

For motion along x :

$$M \ddot{x} = -kx - c \dot{x} - (m\ell/2) \ddot{\theta} \cos \theta - m \ddot{x} + (m\ell/2) \dot{\theta}^2 \sin \theta + F(t) \quad (1)$$

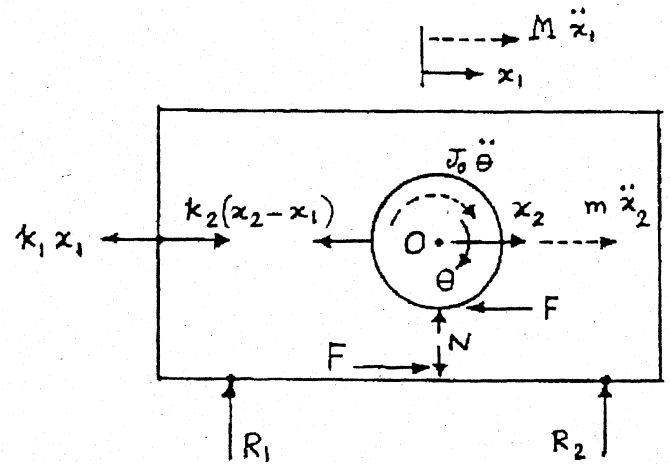
For rotation about O:

$$J_c \ddot{\theta} + (m\ell/2) \ddot{\theta} (\ell/2) + m \ddot{x} (\ell \cos \theta/2) = -mg(\ell/2) \sin \theta + M_t(t) \quad (2)$$

Using $J_c = \frac{1}{12} m \ell^2$, $\cos \theta \approx 1$ and $\sin \theta \approx \theta$ and neglecting the nonlinear term involving $\dot{\theta}^2$ in Eq. (1), Eqs. (1) and (2) can be rewritten in matrix form as:

$$\begin{bmatrix} (M+m) & m\ell/2 \\ m\ell/2 & (J_c + m\ell^2/4) \end{bmatrix} \begin{Bmatrix} \ddot{x} \\ \ddot{\theta} \end{Bmatrix} + \begin{bmatrix} c & 0 \\ 0 & 0 \end{bmatrix} \begin{Bmatrix} \dot{x} \\ \dot{\theta} \end{Bmatrix} + \begin{bmatrix} k & 0 \\ 0 & mg\ell/2 \end{bmatrix} \begin{Bmatrix} x \\ \theta \end{Bmatrix} = \begin{Bmatrix} F(t) \\ M_t(t) \end{Bmatrix}$$

5.39



Free body diagram

N = normal reaction between cylinder and trailer, F = friction force, R_1, R_2 = reactions between trailer and ground.

Equation of motion for linear motion of cylinder:

$$\sum F = m \ddot{x}_2 \quad \text{or} \quad m \ddot{x}_2 = -F - k_2 (x_2 - x_1) \quad (1)$$

Equation of motion for rotational motion of cylinder:

$$\sum M_O = J_0 \ddot{\theta} \quad \text{or} \quad J_0 \ddot{\theta} = F r \quad (2)$$

where $J_0 = \frac{1}{2} m r^2$ and $\theta = \frac{x_2 - x_1}{r}$.

Equation of motion for linear motion of trailer:

$$\sum F = M \ddot{x}_1 \quad \text{or} \quad M \ddot{x}_1 = -k_1 x_1 + k_2 (x_2 - x_1) + F \quad (3)$$

Eq. (2) gives

$$F = \frac{J_0 \ddot{\theta}}{r} = \frac{1}{r} \left(\frac{1}{2} m r^2 \right) \left(\frac{\ddot{x}_2 - \ddot{x}_1}{r} \right) = \frac{m}{2} (\ddot{x}_2 - \ddot{x}_1) \quad (4)$$

Substitution of Eq. (4) into Eqs. (1) and (3) yields the equations of motion as:

$$\frac{3m}{2} \ddot{x}_2 - \frac{1}{2} m \ddot{x}_1 - k_2 x_1 + k_2 x_2 = 0 \quad (5)$$

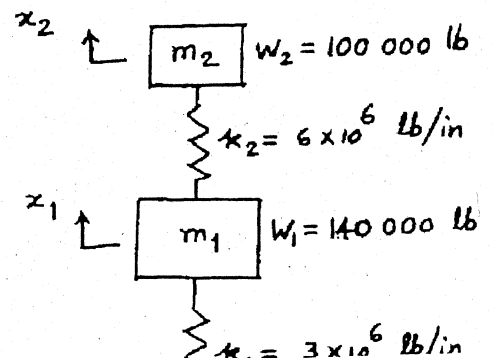
$$\left(M + \frac{m}{2} \right) \ddot{x}_1 - \frac{m}{2} \ddot{x}_2 + x_1 (k_1 + k_2) - k_2 x_2 = 0 \quad (6)$$

5.40 (a) Natural frequencies of the system:

From problem 5.1,

$$\omega_{1,2}^2 = \frac{k_1 + k_2}{2m_1} + \frac{k_2}{2m_2}$$

$$\mp \sqrt{\frac{1}{4} \left(\frac{k_1 + k_2}{m_1} + \frac{k_2}{m_2} \right)^2 - \frac{k_1 k_2}{m_1 m_2}}$$



$$\frac{\omega_{1,2}^2}{g} = \frac{9 \times 10^6}{28 \times 10^4} + \frac{6 \times 10^6}{20 \times 10^4}$$

$$F \sqrt{\frac{1}{4} \left(\frac{9 \times 10^6}{14 \times 10^4} + \frac{6 \times 10^6}{10 \times 10^4} \right)^2 - \frac{18 \times 10^{12}}{140 \times 10^8}}$$

or

$$\omega_1 = 66.3408 \text{ rad/sec}$$

$$\omega_2 = 208.8557 \text{ rad/sec}$$

(b) Initial conditions of the system:

Let v_2 = initial velocity of anvil and frame just after the impact of tup

From conservation of momentum principle,

momentum of tup plus momentum of anvil just before impact
= momentum of tup plus momentum of anvil just after impact

$$\text{i.e., } m_{\text{tup}} v_{\text{tup}} + m_{\text{anvil}} (0) = m_{\text{tup}} v_0 + m_{\text{anvil}} v_2 \quad (E_1)$$

Where v_0 = velocity of rebound of tup after impact

Also,

$$\text{coefficient of restitution } (e) = \left(\frac{\text{relative velocity after impact}}{\text{relative velocity before impact}} \right)$$

$$\text{i.e., } e = \frac{v_2 - v_0}{v_{\text{tup}}} \quad \text{or} \quad v_0 = v_2 - e v_{\text{tup}} \quad (E_2)$$

From Eqs. (E₁) and (E₂),

$$v_2 = \frac{m_{\text{tup}} v_{\text{tup}} (1+e)}{m_{\text{tup}} + m_{\text{anvil}}} \quad (E_3)$$

For given data,

$$v_2 = \frac{5000 (180) (1+0.5)}{105000} = 12.8571 \text{ in/sec}$$

∴ Initial conditions are:

$$x_1(0) = 0, \quad \dot{x}_1(0) = 0$$

$$x_2(0) = 0, \quad \dot{x}_2(0) = 12.8571 \text{ in/sec}$$

(C) Displacements of anvil and foundation block:

We can use results of section 5.3 with $\kappa_3 = 0$.

$$r_1 = \frac{x_2^{(1)}}{x_1^{(1)}} = \frac{-m_1 \omega_1^2 + \kappa_1 + \kappa_2}{\kappa_2} = \frac{-\frac{140000}{386.4} (4401.096) + 9 \times 10^6}{6 \times 10^6}$$
$$= 1.2342$$

$$r_2 = \frac{x_2^{(2)}}{x_1^{(2)}} = \frac{-m_1 \omega_2^2 + \kappa_1 + \kappa_2}{\kappa_2} = \frac{-\frac{140000}{386.4} (43620.696) + 9 \times 10^6}{6 \times 10^6}$$
$$= -1.1341$$

Response of the system can be computed using Eqs. (5.18):

$$x_1^{(1)} = \frac{1}{r_2 - r_1} \left(\frac{\dot{x}_2}{\omega_1} \right) = \frac{1}{-2.3683} \left(\frac{12.8571}{66.3408} \right) = -0.08183 \text{ in}$$

$$x_1^{(2)} = \frac{1}{r_2 - r_1} \left(\frac{\dot{x}_2}{\omega_2} \right) = \frac{1}{-2.3683} \left(\frac{12.8571}{208.8557} \right) = -0.02599 \text{ in}$$

$$\phi_1 = \tan^{-1} \left\{ \frac{\dot{x}_2(0)}{0} \right\} = \frac{\pi}{2}$$

$$\phi_2 = \tan^{-1} \left\{ -\frac{\dot{x}_2(0)}{0} \right\} = -\frac{\pi}{2}$$

Response is given by Eqs. (5.15):

$$x_1(t) = x_1^{(1)} \cos(\omega_1 t + \phi_1) + x_1^{(2)} \cos(\omega_2 t + \phi_2)$$

$$= -0.08183 \cos(66.3408 t + \frac{\pi}{2}) - 0.02599 \cos(208.8557 t - \frac{\pi}{2}) \text{ in.}$$

$$x_2(t) = r_1 x_1^{(1)} \cos(\omega_1 t + \phi_1) + r_2 x_1^{(2)} \cos(\omega_2 t + \phi_2)$$

$$= -0.1010 \cos(66.3408 t + \frac{\pi}{2}) + 0.02948 \cos(208.8557 t - \frac{\pi}{2}) \text{ in.}$$

5.41 (a) Natural frequencies:

$$\text{Equations of motion: } m_1 \ddot{x}_1 + \kappa_1 x_1 - \kappa_1 x_2 = F_1(t) \quad (E_1)$$

$$m_2 \ddot{x}_2 + (\kappa_1 + \kappa_2) x_2 - \kappa_1 x_1 = 0 \quad (E_2)$$

Frequency equation:

$$\begin{vmatrix} -\omega^2 m_1 + \kappa_1 & -\kappa_1 \\ -\kappa_1 & -m_2 \omega^2 + \kappa_1 + \kappa_2 \end{vmatrix} = 0$$

$$\text{or } \omega^4 - \left(\frac{k_1}{m_1} + \frac{k_1 + k_2}{m_2} \right) \omega^2 + \frac{k_1 k_2}{m_1 m_2} = 0$$

$$\therefore \omega_{1,2}^2 = \frac{k}{2m_1} + \frac{k_1 + k_2}{2m_2} \mp \sqrt{\frac{1}{4} \left(\frac{k_1}{m_1} + \frac{k_1 + k_2}{m_2} \right)^2 - \frac{k_1 k_2}{m_1 m_2}}$$

Here $m_1 = 2 \times 10^5 \text{ kg}$, $m_2 = 2.5 \times 10^5 \text{ kg}$, $k_1 = 150 \times 10^6 \text{ N/m}$
and $k_2 = 75 \times 10^6 \text{ N/m}$.

$$\begin{aligned} \omega_{1,2}^2 &= \frac{150 \times 10^6}{4 \times 10^5} + \frac{225 \times 10^6}{5 \times 10^5} \mp \sqrt{\frac{1}{4} \left(\frac{150 \times 10^6}{2 \times 10^5} + \frac{225 \times 10^6}{2.5 \times 10^5} \right)^2 - \frac{150 \times 75 \times 10^{12}}{5 \times 10^{10}}} \\ &= 150, 1500 \text{ (rad/sec)}^2 \end{aligned}$$

$$\therefore \omega_1 = 12.2474 \text{ rad/sec}, \quad \omega_2 = 38.7298 \text{ rad/sec}$$

(b) Response:

Assuming zero initial conditions, the Laplace transforms of (E_1) and (E_2) can be written as

$$m_1 s^2 \bar{x}_1(s) + k_1 \bar{x}_1(s) - k_1 \bar{x}_2(s) = \bar{F}_1(s)$$

$$m_2 s^2 \bar{x}_2(s) + (k_1 + k_2) \bar{x}_2(s) - k_1 \bar{x}_1(s) = 0$$

$$\text{i.e. } (m_1 s^2 + k_1) \bar{x}_1(s) - k_1 \bar{x}_2(s) = \bar{F}_1(s)$$

$$-k_1 \bar{x}_1(s) + (m_2 s^2 + k_1 + k_2) \bar{x}_2(s) = 0$$

Solution of these equations gives

$$\bar{x}_1(s) = \left\{ \frac{(m_2 s^2 + k_1 + k_2)}{m_1 m_2 s^4 + s^2 (m_1 k_1 + m_1 k_2 + m_2 k_1) + k_1 k_2} \right\} \bar{F}_1(s) \quad \text{---- (E}_3\text{)}$$

$$\bar{x}_2(s) = \left\{ \frac{k_1}{m_1 m_2 s^4 + s^2 (m_1 k_1 + m_1 k_2 + m_2 k_1) + k_1 k_2} \right\} \bar{F}_1(s) \quad \text{---- (E}_4\text{)}$$

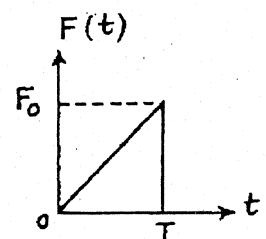
For the forcing function given,

$$\bar{F}_1(s) = \bar{F}(s) = \frac{F_0}{T} \left\{ \frac{1}{s^2} - e^{-Ts} \left(\frac{T}{s} - \frac{1}{s^2} \right) \right\} \quad \text{---- (E}_5\text{)}$$

For the given data, Eqs. (E₃) to (E₅) become

$$\bar{x}_1(s) = \frac{2.5 \times 10^5 s^2 + 225 \times 10^6}{(5 \times 10^{10} s^4 + 825 \times 10^{11} s^2 + 11250 \times 10^{12})} \bar{F}_1(s)$$

$$= \frac{s^2 + 900}{2 \times 10^5 s^4 + 330 \times 10^6 s^2 + 45 \times 10^9} \bar{F}_1(s) \quad \text{---- (E}_6\text{)}$$



$$\bar{x}_2(s) = \frac{150 \times 10^6}{5 \times 10^{10} s^4 + 825 \times 10^{11} s^2 + 11250 \times 10^{12}} \bar{F}_1(s)$$

$$= \frac{30}{10^4 s^4 + 165 \times 10^5 s^2 + 225 \times 10^7} \bar{F}_1(s) \quad \text{---- (E7)}$$

where $\bar{F}_1(s) = 2 \times 10^5 \left[\frac{1}{s^2} - e^{-0.5s} \left(\frac{1}{2s} - \frac{1}{s^2} \right) \right]$ ---- (E8)

The inverse transforms of (E6) and (E7) yield $x_1(t)$ and $x_2(t)$.

5.42 Equations of motion for free vibration are (from Eqs. (5.1) and (5.2)):

$$\left. \begin{aligned} m_1 \ddot{x}_1 + (c_1 + c_2) \dot{x}_1 + (k_1 + k_2) x_1 - c_2 \dot{x}_2 - k_2 x_2 &= 0 \\ m_2 \ddot{x}_2 + (c_2 + c_3) \dot{x}_2 + (k_2 + k_3) x_2 - c_2 \dot{x}_1 - k_2 x_1 &= 0 \end{aligned} \right\} \quad \text{(E1)}$$

Assuming the solution as

$$x_i(t) = \bar{c}_i e^{s_i t} \quad ; \quad i = 1, 2$$

Eqs. (E1) can be rewritten as

$$\begin{bmatrix} m_1 s^2 + (c_1 + c_2) s + (k_1 + k_2) & -(c_2 s + k_2) \\ -(c_2 s + k_2) & m_2 s^2 + (c_2 + c_3) s + (k_2 + k_3) \end{bmatrix} \begin{Bmatrix} \bar{c}_1 \\ \bar{c}_2 \end{Bmatrix} = \begin{Bmatrix} 0 \\ 0 \end{Bmatrix} \quad \text{(E2)}$$

For a non-trivial solution of Eqs. (E2),

$$\begin{vmatrix} m_1 s^2 + (c_1 + c_2) s + k_1 + k_2 & -(c_2 s + k_2) \\ -(c_2 s + k_2) & m_2 s^2 + (c_2 + c_3) s + k_2 + k_3 \end{vmatrix} = 0$$

i.e.,

$$\begin{aligned} & s^4 (m_1 m_2) + s^3 [m_1 (c_2 + c_3) + m_2 (c_1 + c_2)] + s^2 [m_1 (k_2 + k_3) \\ & + (c_1 + c_2)(c_2 + c_3) + m_2 (k_1 + k_2) - c_2^2] + s [(c_1 + c_2)(k_2 + k_3) \\ & + (c_2 + c_3)(k_1 + k_2) - 2c_2 k_2] + [(k_1 + k_2)(k_2 + k_3) - k_2^2] = 0 \end{aligned} \quad \text{(E3)}$$

This equation can be expressed as

$$a_0 s^4 + a_1 s^3 + a_2 s^2 + a_3 s + a_4 = 0 \quad \text{(E4)}$$

where a_0, a_1, \dots, a_4 can be identified by comparing Eqs. (E4) and (E3).

Nature of possible solutions:

If s_1, s_2, s_3 and s_4 are the roots of Eq. (E₄), the general solution of the system can be expressed as

$$\left. \begin{aligned} x_1(t) &= \varphi_1^{(1)} e^{s_1 t} + \varphi_1^{(2)} e^{s_2 t} + \varphi_1^{(3)} e^{s_3 t} + \varphi_1^{(4)} e^{s_4 t} \\ x_2(t) &= \varphi_2^{(1)} e^{s_1 t} + \varphi_2^{(2)} e^{s_2 t} + \varphi_2^{(3)} e^{s_3 t} + \varphi_2^{(4)} e^{s_4 t} \end{aligned} \right\} \quad (E_5)$$

where the constants $\varphi_i^{(i)}$, $i=1$ to 4 , can be found from the four initial conditions of the system, namely, $x_1(0)$, $x_2(0)$, $\dot{x}_1(0)$ and $\dot{x}_2(0)$. The ratios of amplitudes $\varphi_1^{(i)} / \varphi_2^{(i)}$ can be determined from Eqs. (E₂) as

$$\frac{\varphi_1^{(i)}}{\varphi_2^{(i)}} = \frac{c_2 s_i + k_2}{m_1 s_i^2 + (c_1 + c_2) s_i + k_1 + k_2} = \frac{m_2 s_i^2 + (c_2 + c_3) s_i + k_2 + k_3}{c_2 s_i + k_2};$$
$$i = 1, 2, 3, 4 \quad (E_6)$$

If any root s_i has a positive real part, $x_1(t)$ and $x_2(t)$ will increase with time. If all s_i have negative real parts as

$$s_j = -r_j + i \omega_j$$

then the solution, $x_1(t)$, can be expressed as

$$x_1(t) = \sum_{j=1}^4 \varphi_1^{(j)} e^{-r_j t} e^{i \omega_j t} = \sum_{j=1}^4 \varphi_1^{(j)} e^{-r_j t} (\cos \omega_j t + i \sin \omega_j t)$$

If two roots s_1 and s_2 are complex conjugates as

$$s_1 = -(r_1 + i \omega_1) \quad \text{and} \quad s_2 = -(r_1 - i \omega_1),$$

$x_1(t)$ can be expressed as

$$\begin{aligned} x_1(t) &= e^{-r_1 t} \left\{ \varphi_1^{(1)} \cos \omega_1 t - i \varphi_1^{(1)} \sin \omega_1 t \right\} \\ &+ e^{-r_1 t} \left\{ \varphi_1^{(2)} \cos \omega_1 t + i \varphi_1^{(2)} \sin \omega_1 t \right\} \\ &+ \varphi_1^{(3)} e^{s_3 t} + \varphi_1^{(4)} e^{s_4 t} \end{aligned}$$

similar expressions can be derived for $x_2(t)$.

5.43

$$m_1 = m_2 = 10 \text{ kg}, \quad k_1 = k_2 = 2000 \text{ N/m}, \quad k_3 = 2 \text{ N/m},$$

$$c_1 = 100 \text{ N-s/m}, \quad c_2 = c_3 = 1 \text{ N-s/m}.$$

Equations (E₃) and (E₄) in the solution of problem 5.42 give

$$a_0 = m_1 m_2 = 100$$

$$a_1 = 10(2) + 10(101) = 1030$$

$$a_2 = 10(2002) + 101(2) + 10(4000) - 1 = 60221$$

$$a_3 = 101(2002) + 2(4000) - 2(1)(2000) = 206202$$

$$a_4 = 4000(2002) - 4 \times 10^6 = 4008000$$

and

$$100s^4 + 1030s^3 + 60221s^2 + 206202s + 4008000 = 0 \quad (E_1)$$

Using PROGRAM 10, the roots of Eq. (E₁) can be found as

$$s_{1,2} = -1.4714 \pm i 8.8272 \quad (E_2)$$

$$s_{3,4} = -3.6786 \pm i 22.0668 \quad (E_3)$$

Thus the solution is given by

$$x_1(t) = \sum_{j=1}^4 \zeta_1^{(j)} e^{s_j t}, \quad x_2(t) = \sum_{j=1}^4 \zeta_2^{(j)} e^{s_j t} \quad (E_4, E_5)$$

where $\zeta_1^{(j)}$, $j = 1, 2, 3, 4$, can be found from the initial conditions, and the ratios of amplitudes $\left\{ \frac{\zeta_1^{(j)}}{\zeta_2^{(j)}} \right\}$ can be obtained from Eq. (E₆) in problem 5.42:

$$\frac{\zeta_1^{(j)}}{\zeta_2^{(j)}} = \frac{c_2 s_j + k_2}{m_1 s_j^2 + (c_1 + c_2) s_j + k_1 + k_2} = \frac{s_j + 2000}{10 s_j^2 + 101 s_j + 4000}; \quad j = 1, 2, 3, 4 \quad (E_6)$$

For $j=1$, $s_1 = -1.4714 + i 8.8272$ and (E₆) gives†

$$\alpha_1 = \zeta_1^{(1)} / \zeta_2^{(1)} = 0.6207 - i 0.1239 \quad (E_7)$$

For $j=2$, $s_2 = -1.4714 - i 8.8272$ and (E₆) gives

$$\alpha_2 = \zeta_1^{(2)} / \zeta_2^{(2)} = 0.6207 + i 0.1239 \quad (E_8)$$

For $j=3$, $s_3 = -3.6786 + i 22.0668$ and (E₆) yields

$$\alpha_3 = \zeta_1^{(3)} / \zeta_2^{(3)} = -1.3808 - i 0.7758 \quad (E_9)$$

For $j=4$, $s_4 = -3.6786 - i 22.0668$ and (E₆) yields

$$\alpha_4 = \zeta_1^{(4)} / \zeta_2^{(4)} = -1.3808 + i 0.7758 \quad (E_{10})$$

Thus the solution of Eqs. (E₄) and (E₅) can be rewritten as

$$x_1(t) = \sum_{j=1}^4 \alpha_j \zeta_2^{(j)} e^{s_j t}, \quad x_2(t) = \sum_{j=1}^4 \alpha_j e^{s_j t} \quad (E_{11}, E_{12})$$

Since the pairs (α_1, α_2) , (α_3, α_4) , (s_1, s_2) and (s_3, s_4) are complex conjugates, we can express them as

$$\left. \begin{aligned} \alpha_1, \alpha_2 &= p_1 \pm i v_1; & \alpha_3, \alpha_4 &= p_2 \pm i v_2 \\ s_1, s_2 &= u_1 \pm i v_1; & s_3, s_4 &= u_2 \pm i v_2 \end{aligned} \right\} \quad (E_{13})$$

and (E₁₁) and (E₁₂) can be simplified further. However, we proceed directly with (E₁₁) and (E₁₂) and use the initial conditions to evaluate the constants $\zeta_2^{(j)}$; $j=1,2,3,4$:

$$\left. \begin{aligned} x_1(0) &= \alpha_1 \zeta_2^{(1)} + \alpha_2 \zeta_2^{(2)} + \alpha_3 \zeta_2^{(3)} + \alpha_4 \zeta_2^{(4)} = 0.2 \\ x_2(0) &= \zeta_2^{(1)} + \zeta_2^{(2)} + \zeta_2^{(3)} + \zeta_2^{(4)} = 0.1 \\ \dot{x}_1(0) &= s_1 \alpha_1 \zeta_2^{(1)} + s_2 \alpha_2 \zeta_2^{(2)} + s_3 \alpha_3 \zeta_2^{(3)} + s_4 \alpha_4 \zeta_2^{(4)} = 0 \\ \dot{x}_2(0) &= s_1 \zeta_2^{(1)} + s_2 \zeta_2^{(2)} + s_3 \zeta_2^{(3)} + s_4 \zeta_2^{(4)} = 0 \end{aligned} \right\} \quad (E_{14})$$

Once $\zeta_2^{(j)}$, $j=1,2,3,4$ are determined from Eqs. (E₁₄), the displacements of masses $x_1(t)$ and $x_2(t)$ can be obtained using Eqs. (E₁₁) and (E₁₂).

† If $s = a + ib$, $s^2 = (a^2 - b^2) + i(2ab)$

If $x = \frac{a+bi}{c+di}$, it can be rewritten as

$$x = \frac{(a+bi)(c-di)}{(c^2+d^2)} = \left(\frac{ac+bd}{c^2+d^2} \right) + i \left(\frac{bc-ad}{c^2+d^2} \right)$$

5.44

$$\omega = \frac{2\pi(1200)}{60} = 125.664 \text{ rad/sec}$$

$$F_1(t) = m e \omega^2 \cos \omega t$$

$$= \left(\frac{0.5}{386.4} \right) (6) (125.664)^2 \cos 125.664 t$$

$$= 122.6044 \cos 125.664 t \text{ lb}$$

$$m_1 = 800/386.4 = 2.0704 \text{ lb-s}^2/\text{in}$$

$$m_2 = 2000/386.4 = 5.1760 \text{ lb-s}^2/\text{in}$$

$$k_1 = 2000 \text{ lb/in}, \quad k_2 = 1000 \text{ lb/in}, \quad c_2 = 200 \text{ lb-s/in}, \quad F_{10} = 122.6044, \\ F_{20} = 0.$$

Equations of motion are [substitute $k_1 = k_2, c_1 = c_2, m_1 = m_2,$
 $F_1 = 0, k_2 = k_1, c_2 = 0, m_2 = m_1, F_2 = F_1, k_3 = 0, c_3 = 0$ in Eq. (5.3)]:

$$\begin{bmatrix} m_2 & 0 \\ 0 & m_1 \end{bmatrix} \begin{Bmatrix} \ddot{x}_2 \\ \ddot{x}_1 \end{Bmatrix} + \begin{bmatrix} c_2 & 0 \\ 0 & 0 \end{bmatrix} \begin{Bmatrix} \dot{x}_2 \\ \dot{x}_1 \end{Bmatrix} + \begin{bmatrix} k_2 + k_1 & -k_1 \\ -k_1 & k_1 \end{bmatrix} \begin{Bmatrix} x_2 \\ x_1 \end{Bmatrix} = \begin{Bmatrix} 0 \\ F_1(t) \end{Bmatrix} \dots (E_1)$$

or

$$\begin{bmatrix} m_1 & 0 \\ 0 & m_2 \end{bmatrix} \begin{Bmatrix} \ddot{x}_1 \\ \ddot{x}_2 \end{Bmatrix} + \begin{bmatrix} 0 & 0 \\ 0 & c_2 \end{bmatrix} \begin{Bmatrix} \dot{x}_1 \\ \dot{x}_2 \end{Bmatrix} + \begin{bmatrix} k_1 & -k_1 \\ -k_1 & k_1 + k_2 \end{bmatrix} \begin{Bmatrix} x_1 \\ x_2 \end{Bmatrix} = \begin{Bmatrix} F_1(t) \\ 0 \end{Bmatrix} \dots (E_2)$$

Comparing (E2) with Eq. (5.27), we find that

$$m_{11} = m_1, \quad m_{12} = 0, \quad m_{22} = m_2, \quad c_{11} = 0, \quad c_{12} = 0, \quad c_{22} = c_2, \quad k_{11} = k_1, \quad k_{12} = 0 \text{ and}$$

$$k_{22} = k_1 + k_2.$$

Application of Eq. (5.31) leads to

$$Z_{11}(i\omega) = -\omega^2 m_{11} + i\omega c_{11} + k_{11} = -m_1 \omega^2 + k_1$$

$$Z_{12}(i\omega) = -\omega^2 m_{12} + i\omega c_{12} + k_{12} = -k_1$$

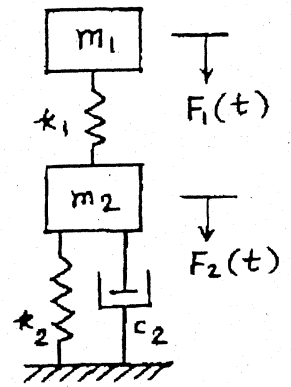
$$Z_{22}(i\omega) = -\omega^2 m_{22} + i\omega c_{22} + k_{22} = -m_2 \omega^2 + i\omega c_2 + k_1 + k_2$$

Response of the system can be expressed as

$$x_j(t) = X_j e^{i\omega t} = X_j \cos \omega t \quad (\text{real part})$$

with X_j given by Eq. (5.35):

$$X_1(i\omega) = \frac{Z_{22}(i\omega) \cdot F_{10} - Z_{12}(i\omega) \cdot F_{20}}{Z_{11}(i\omega) \cdot Z_{22}(i\omega) - Z_{12}^2(i\omega)}$$



$$= \frac{(-m_2 \omega^2 + i\omega c_2 + k_1 + k_2) F_{10}}{(-m_1 \omega^2 + k_1) (-m_2 \omega^2 + i\omega c_2 + k_1 + k_2) - k_1^2}$$

$$= \frac{\{-5.176 (125.664)^2 + i(125.664)(200) + 3000\} 122.6044}{\{-2.0704 (125.664)^2 + 2000\} [-5.176 (125.664)^2 + i(125.664)(200) + 3000] - 4 \times 10^6}$$

$$= (-40.0042 - 0.01919 i) \times 10^{-4} \text{ in}$$

$$X_2(i\omega) = \frac{-Z_{12}(i\omega) F_{10} + Z_{11}(i\omega) F_{20}}{Z_{11}(i\omega) Z_{22}(i\omega) - Z_{12}^2(i\omega)} = \frac{k F_{10}}{Z_{11}(i\omega) Z_{22}(i\omega) - Z_{12}^2(i\omega)}$$

$$= \frac{2000(122.6044)}{(24.1272 - 7.7143 i) 10^8} = (0.9221 + 0.2948 i) \times 10^{-4} \text{ in}$$

5.45 $k_1 = k_{\text{beam}} = \frac{192 E \left(\frac{1}{12} a t^3\right)}{l^3} = \frac{16 E a t^3}{l^3}$

Equations of motion:

$$\left. \begin{aligned} m_1 \ddot{x}_1 + k_1 x_1 + k_2 (x_1 - x_2) &= F_1(t) = F_0 \cos \omega t \\ m_2 \ddot{x}_2 + k_2 (x_2 - x_1) &= 0 \end{aligned} \right\} \dots (E_1)$$

Assuming harmonic response

$$x_j(t) = X_j \cos \omega t ; j=1,2$$

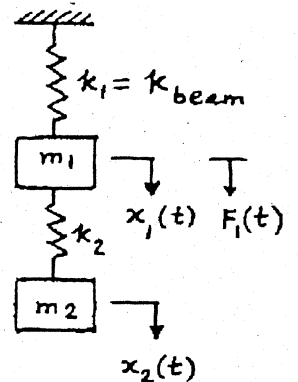
Eqs. (E₁) yield

$$X_1 = \frac{(k_2 - m_2 \omega^2) F_0}{(k_1 + k_2 - m_1 \omega^2)(k_2 - m_2 \omega^2) - k_2^2}$$

$$X_2 = \frac{k_2 F_0}{(k_1 + k_2 - m_1 \omega^2)(k_2 - m_2 \omega^2) - k_2^2}$$

For no steady state vibration of the beam, $X_1 = 0$ and hence the condition to be satisfied is

$$\frac{k_2}{m_2} = \omega^2$$



5.46 Equations of motion:

$$m_1 \ddot{x}_1 + (k_1 + k_2) x_1 - k_2 x_2 = F_1(t) = F_0 \sin \omega t \quad \dots (E_1)$$

$$m_2 \ddot{x}_2 + k_2 x_2 - k_2 x_1 = 0 \quad \dots (E_2)$$

We use $F_0 e^{i\omega t}$ (with $i = \sqrt{-1}$) for $F_1(t)$ and consider only the imaginary part at the end.

Let $x_j(t) = X_j e^{i\omega t}$; $j = 1, 2$

Eqs. (E₁) and (E₂) become

$$-m_1 \omega^2 X_1 e^{i\omega t} + (k_1 + k_2) X_1 e^{i\omega t} - k_2 X_2 e^{i\omega t} = F_0 e^{i\omega t}$$

$$-m_2 \omega^2 X_2 e^{i\omega t} + k_2 X_2 e^{i\omega t} - k_2 X_1 e^{i\omega t} = 0$$

i.e. $[Z(i\omega)] \vec{X} = \vec{F}_0$ ----- (E₃)

where $\vec{X} = \begin{Bmatrix} X_1 \\ X_2 \end{Bmatrix}$, $\vec{F}_0 = \begin{Bmatrix} F_{10} \\ F_{20} \end{Bmatrix} = \begin{Bmatrix} F_0 \\ 0 \end{Bmatrix}$,

$$[Z(i\omega)] = \begin{bmatrix} Z_{11}(i\omega) & Z_{12}(i\omega) \\ Z_{21}(i\omega) & Z_{22}(i\omega) \end{bmatrix},$$

$$Z_{11}(i\omega) = -m_1 \omega^2 + k_1 + k_2, \quad Z_{12}(i\omega) = Z_{21}(i\omega) = -k_2,$$

$$Z_{22}(i\omega) = -m_2 \omega^2 + k_2.$$

Eqs. (5.35) give

$$X_1(i\omega) = \frac{(-m_2 \omega^2 + k_2) F_0}{(-m_1 \omega^2 + k_1 + k_2)(-m_2 \omega^2 + k_2) - k_2^2}$$

$$X_2(i\omega) = \frac{k_2 F_0}{(-m_1 \omega^2 + k_1 + k_2)(-m_2 \omega^2 + k_2) - k_2^2}$$

Since $F_0 \sin \omega t = \text{Im}(F_0 e^{i\omega t})$, $x_j(t) = \text{Im}(X_j e^{i\omega t}) = X_j \sin \omega t$

$$\therefore x_1(t) = \frac{(-m_2 \omega^2 + k_2) F_0}{(-m_1 \omega^2 + k_1 + k_2)(-m_2 \omega^2 + k_2) - k_2^2} \sin \omega t$$

$$x_2(t) = \frac{k_2 F_0}{(-m_1 \omega^2 + k_1 + k_2)(-m_2 \omega^2 + k_2) - k_2^2} \sin \omega t$$

5.47

Equations of motion:

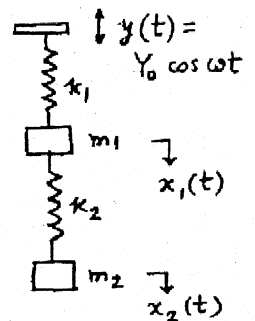
$$m_1 \ddot{x}_1 = -k_1(x_1 - y) - k_2(x_1 - x_2)$$

$$m_2 \ddot{x}_2 = -k_2(x_2 - x_1)$$

or $m_1 \ddot{x}_1 + (k_1 + k_2)x_1 - k_2 x_2 = k_1 Y_0 \cos \omega t$ --- (E₁)

$$m_2 \ddot{x}_2 + k_2 x_2 - k_2 x_1 = 0$$
 --- (E₂)

As there is no damping, the masses vibrate either in phase or 180° out of phase with respect to the base motion. Hence the response can be taken as



$$x_j(t) = X_j \cos \omega t \quad ; \quad j = 1, 2 \quad \text{--- (E}_3\text{)}$$

Eqs. (E₁) and (E₂) reduce to

$$(-\omega^2 m_1 + k_1 + k_2) X_1 - k_2 X_2 = k_1 Y_0$$

$$-k_2 X_1 + (-\omega^2 m_2 + k_2) X_2 = 0$$

i.e. $[Z(i\omega)] \vec{X} = \vec{F}$ where $\vec{X} = \begin{Bmatrix} X_1 \\ X_2 \end{Bmatrix}$, $\vec{F} = \begin{Bmatrix} F_{10} \\ F_{20} \end{Bmatrix} = \begin{Bmatrix} k_1 Y_0 \\ 0 \end{Bmatrix}$

$$Z_{11}(i\omega) = -\omega^2 m_1 + k_1 + k_2, \quad Z_{12}(i\omega) = Z_{21}(i\omega) = -k_2,$$

$$Z_{22}(i\omega) = -\omega^2 m_2 + k_2.$$

Eqs. (5.35) and (E₃) give

$$x_1(t) = \frac{(-\omega^2 m_2 + k_2) k_1 Y_0}{(-m_1 \omega^2 + k_1 + k_2)(-\omega^2 m_2 + k_2) - k_2^2} \cos \omega t$$

$$x_2(t) = \frac{k_1 k_2 Y_0}{(-m_1 \omega^2 + k_1 + k_2)(-\omega^2 m_2 + k_2) - k_2^2} \cos \omega t$$

5.48

Equations of motion:

$$m_1 \ddot{x}_1 + (c_1 + c_2) \dot{x}_1 + (k_1 + k_2) x_1 - c_2 \dot{x}_2 - k_2 x_2 = F_1(t) = F_0 e^{i\omega t}$$

$$m_2 \ddot{x}_2 + c_2 \dot{x}_2 + k_2 x_2 - c_2 \dot{x}_1 - k_2 x_1 = 0$$

Let $x_j(t) = X_j e^{i\omega t}$, $j=1,2$

Equations of motion become

$$[-\omega^2 m_1 + i\omega(c_1 + c_2) + k_1 + k_2] X_1 - (i\omega c_2 + k_2) X_2 = F_0 \quad \text{--- (E}_1\text{)}$$

$$-(i\omega c_2 + k_2) X_1 + [-\omega^2 m_2 + i\omega c_2 + k_2] X_2 = 0 \quad \text{--- (E}_2\text{)}$$

For given data, (E₁) and (E₂) become

$$[Z(i\omega)] \vec{X} = \vec{F}_0 \quad \text{--- (E}_3\text{)}$$

where $Z_{11}(i\omega) = 400i + 999$

$$Z_{12}(i\omega) = Z_{21}(i\omega) = -200i - 500$$

$$Z_{22}(i\omega) = 200i + 499$$

$$\vec{X} = \begin{Bmatrix} X_1 \\ X_2 \end{Bmatrix}, \quad \vec{F}_0 = \begin{Bmatrix} F_{10} \\ F_{20} \end{Bmatrix} = \begin{Bmatrix} F_0 \\ 0 \end{Bmatrix}$$

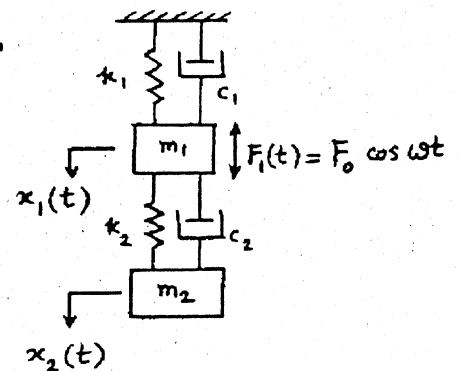
Solution of (E₃) is, using Eqs. (5.35),

$$k_1 = k_2 = 500 \text{ N/m}$$

$$m_1 = m_2 = 1 \text{ kg}$$

$$c_1 = c_2 = c = 200 \text{ N.s/m}$$

$$\omega = 1 \text{ rad/s}$$



$$x_1 = \frac{(200i + 499) F_0}{(400i + 999)(200i + 499) - (-200i - 500)^2} = \frac{(200i + 499) F_0}{(199400i + 208501)}$$

$$= \frac{(200i + 499)(-199400i + 208501) F_0}{(199400i + 208501)(-199400i + 208501)}$$

$$= (17.2915 \times 10^{-4} - 6.9444 \times 10^{-4} i) F_0 \quad \text{---- (E}_4\text{)}$$

$$x_2 = \frac{(200i + 500) F_0}{(400i + 999)(200i + 499) - (-200i - 500)^2} = \frac{(200i + 500) F_0}{(199400i + 208501)}$$

$$= \frac{(200i + 500)(-199400i + 208501) F_0}{(199400i + 208501)(-199400i + 208501)}$$

$$= (17.3165 \times 10^{-4} - 6.9684 \times 10^{-4} i) F_0 \quad \text{---- (E}_5\text{)}$$

Final solution is given by the real parts as

$$x_1(t) = \text{Re}(x_1 e^{i\omega t}) = \text{Re}(x_1 \cos \omega t + i x_1 \sin \omega t)$$

$$= \text{Re}[(17.2915 \times 10^{-4} - 6.9444 \times 10^{-4} i) F_0 \cos \omega t + (17.2915 \times 10^{-4} i + 6.9444 \times 10^{-4}) F_0 \sin \omega t]$$

$$= 17.2915 \times 10^{-4} F_0 \cos \omega t + 6.9444 \times 10^{-4} F_0 \sin \omega t \quad \text{--- (E}_6\text{)}$$

$$x_2(t) = \text{Re}(x_2 e^{i\omega t}) = \text{Re}(x_2 \cos \omega t + i x_2 \sin \omega t)$$

$$= \text{Re}[(17.3165 \times 10^{-4} - 6.9684 \times 10^{-4} i) F_0 \cos \omega t + (17.3165 \times 10^{-4} i + 6.9684 \times 10^{-4}) F_0 \sin \omega t]$$

$$= 17.3165 \times 10^{-4} F_0 \cos \omega t + 6.9684 \times 10^{-4} F_0 \sin \omega t \quad \text{--- (E}_7\text{)}$$

5.49

Equations of motion: $m_1 \ddot{x}_1 + (k_1 + k_2)x_1 - k_2 x_2 = F_{10} \cos \omega t = \text{Re}(F_{10} e^{i\omega t})$

$$m_2 \ddot{x}_2 + (k_2 + k_3)x_2 - k_2 x_1 = F_{20} \cos \omega t = \text{Re}(F_{20} e^{i\omega t})$$

Assuming $x_j(t) = X_j e^{i\omega t}$; $j = 1, 2$ along with $F_j(t) = F_{j0} e^{i\omega t}$; $j = 1, 2$, the equations of motion can be expressed as

$$(-\omega^2 m_1 + k_1 + k_2) X_1 - k_2 X_2 = F_{10}$$

$$-k_2 X_1 + (-\omega^2 m_2 + k_2 + k_3) X_2 = F_{20}$$

$$\text{i.e. } [Z(i\omega)] \vec{X} = \vec{F}_0 \quad \text{---- (E}_1\text{)}$$

$$\text{where } Z_{11}(i\omega) = -\omega^2 m_1 + k_1 + k_2, \quad Z_{12}(i\omega) = Z_{21}(i\omega) = -k_2,$$

$$Z_{22}(i\omega) = -\omega^2 m_2 + k_2 + k_3,$$

$$\vec{X} = \begin{Bmatrix} X_1 \\ X_2 \end{Bmatrix}, \quad \vec{F}_0 = \begin{Bmatrix} F_{10} \\ F_{20} \end{Bmatrix}$$

Solution of (E₁) can be expressed, using Eqs. (5.35), as

$$X_1 = \frac{(-\omega^2 m_2 + k_2 + k_3) F_{10} + k_2 F_{20}}{(-\omega^2 m_1 + k_1 + k_2)(-\omega^2 m_2 + k_2 + k_3) - k_2^2} \quad \text{---- (E}_2\text{)}$$

$$X_2 = \frac{k_2 F_{10} + (-\omega^2 m_1 + k_1 + k_2) F_{20}}{(-\omega^2 m_1 + k_1 + k_2)(-\omega^2 m_2 + k_2 + k_3) - k_2^2} \quad \text{---- (E}_3\text{)}$$

Since X_1 and X_2 are real (since there is no damping), the final solution is given by

$$x_1(t) = X_1 \cos \omega t$$

$$x_2(t) = X_2 \cos \omega t$$

where X_1 and X_2 are given by (E₂) and (E₃).

5.50

From the solution of problem 5.46, we have

$$x_1(t) = \frac{(-m_2 \omega^2 + k_2) F_0}{(-m_1 \omega^2 + k_1 + k_2)(-m_2 \omega^2 + k_2) - k_2^2} \sin \omega t$$

$$x_2(t) = \frac{k_2 F_0}{(-m_1 \omega^2 + k_1 + k_2)(-m_2 \omega^2 + k_2) - k_2^2} \sin \omega t$$

For the data $F_1(t) = 50 \sin 4\pi t$, $F_0 = 50$ N, $\omega = 4\pi$ rad/s,

$m_1 = 10$ kg, $m_2 = 5$ kg, $k_1 = 8000$ N/m and $k_2 = 2000$ N/m,

$$x_1(t) = \frac{(-5 \times 16 \pi^2 + 2000) 50}{(-10 \times 16 \pi^2 + 8000 + 2000)(-5 \times 16 \pi^2 + 2000) - (2000)^2} \sin 4\pi t$$

$$= 0.009773 \sin 4\pi t \quad \text{meters}$$

$$x_2(t) = \frac{2000(50)}{(-10 \times 16 \pi^2 + 8000 + 2000)(-5 \times 16 \pi^2 + 2000) - (2000)^2} \sin 4\pi t$$

$$= 0.016148 \sin 4\pi t \quad \text{meters}$$

5.51

$k_1 =$ total stiffness = 800 N/m

$k_2 =$ total stiffness = 600 N/m

$m_1 = 50$ kg, $m_2 = 50$ kg

$Y = 0.2$ m, $\omega = \pi$ rad/s

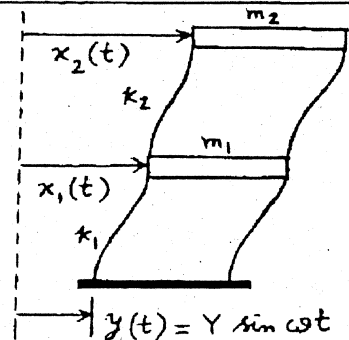
Equations of motion:

$$m_1 \ddot{x}_1 = -k_1(x_1 - y) - k_2(x_1 - x_2)$$

$$m_2 \ddot{x}_2 = -k_2(x_2 - x_1)$$

i.e. $m_1 \ddot{x}_1 + (k_1 + k_2)x_1 - k_2 x_2 = k_1 y = k_1 Y \sin \omega t$

$$m_2 \ddot{x}_2 + k_2 x_2 - k_2 x_1 = 0$$



Assuming $x_i(t) = X_i \sin \omega t$; $i = 1, 2$, we get

$$(-m_1 \omega^2 + k_1 + k_2) X_1 - k_2 X_2 = k_1 Y$$

$$-k_2 X_1 + (-m_2 \omega^2 + k_2) X_2 = 0$$

For given data, these equations take the form

$$(-50\pi^2 + 1400) X_1 - 600 X_2 = (800)(0.2)$$

$$-600 X_1 + (-50\pi^2 + 600) X_2 = 0$$

Solution of these equations gives $X_1 = -0.06469 \text{ m}$, $X_2 = -0.36439 \text{ m}$

$$\therefore x_1(t) = -0.06469 \sin \pi t \text{ m}; \quad x_2(t) = -0.36439 \sin \pi t \text{ m}.$$

5.52

Equations of motion:

$$m_1 \ddot{x}_1 + (k_1 + k_2) x_1 - k_2 x_2 = F_1(t) \quad \text{--- (E}_1\text{)}$$

$$m_2 \ddot{x}_2 + (k_2 + k_3) x_2 - k_2 x_1 = 0 \quad \text{--- (E}_2\text{)}$$

Laplace transforms of (E₁) and (E₂) are

$$m_1 [\delta^2 \bar{x}_1(\delta) - \delta x_1(0) - \dot{x}_1(0)] + (k_1 + k_2) \bar{x}_1(\delta) - k_2 \bar{x}_2(\delta) = \bar{F}_1(\delta)$$

$$m_2 [\delta^2 \bar{x}_2(\delta) - \delta x_2(0) - \dot{x}_2(0)] + (k_2 + k_3) \bar{x}_2(\delta) - k_2 \bar{x}_1(\delta) = 0$$

Rearranging these equations, we get

$$(m_1 \delta^2 + k_1 + k_2) \bar{x}_1(\delta) - k_2 \bar{x}_2(\delta) = \bar{F}_1(\delta) + \delta m_1 x_1(0) + m_1 \dot{x}_1(0) \quad \text{--- (E}_3\text{)}$$

$$-k_2 \bar{x}_1(\delta) + (m_2 \delta^2 + k_2 + k_3) \bar{x}_2(\delta) = \delta m_2 x_2(0) + m_2 \dot{x}_2(0) \quad \text{--- (E}_4\text{)}$$

When $k_1 = k_2 = k_3 = k$ and $m_1 = m_2 = m$, (E₃) and (E₄) give

$$(m \delta^2 + 2k) \bar{x}_1(\delta) - k \bar{x}_2(\delta) = \bar{F}_1(\delta) + \delta m x_1(0) + m \dot{x}_1(0) \quad \text{--- (E}_5\text{)}$$

$$-k \bar{x}_1(\delta) + (m \delta^2 + 2k) \bar{x}_2(\delta) = \delta m x_2(0) + m \dot{x}_2(0) \quad \text{--- (E}_6\text{)}$$

Solution of Eqs. (E₅) and (E₆) gives

$$\bar{x}_1(\delta) = \frac{(m \delta^2 + 2k) \{ \bar{F}_1(\delta) + m x_1(0) \cdot \delta + m \dot{x}_1(0) \} + k \{ m x_2(0) \cdot \delta + m \dot{x}_2(0) \}}{(m \delta^2 + 2k)(m \delta^2 + 2k) - k^2}$$

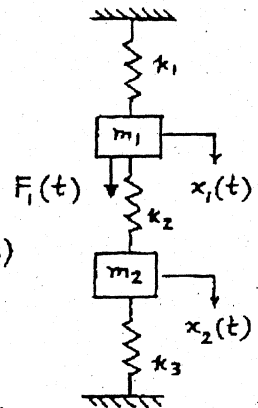
$$\bar{x}_2(\delta) = \frac{k \{ \bar{F}_1(\delta) + m x_1(0) \cdot \delta + \dot{x}_1(0) m \} + (m \delta^2 + 2k) \{ m x_2(0) \cdot \delta + m \dot{x}_2(0) \}}{(m \delta^2 + 2k)(m \delta^2 + 2k) - k^2}$$

These equations become, for $x_1(0) = x_2(0) = \dot{x}_1(0) = \dot{x}_2(0) = 0$,

$$F_1(t) = 5 u(t), \quad \bar{F}_1(\delta) = \frac{5}{\delta}, \quad m = 1 \text{ and } k = 100,$$

$$\bar{x}_1(\delta) = \frac{5(\delta^2 + 200)}{\delta [(\delta^2 + 200)^2 - 10000]} = \frac{5(\delta^2 + 200)}{\delta (\delta^2 + 300)(\delta^2 + 100)} \quad \text{--- (E}_7\text{)}$$

$$\bar{x}_2(\delta) = 100 \left(\frac{5}{\delta} \right) \frac{1}{[(\delta^2 + 200)^2 - 10000]} = \frac{500}{\delta (\delta^2 + 300)(\delta^2 + 100)} \quad \text{--- (E}_8\text{)}$$



By expressing

$$\bar{x}_1(s) = \frac{5(s^2 + 200)}{s(s^2 + 300)(s^2 + 100)} = \frac{A_1}{s} + \frac{A_2 s + A_3}{s^2 + 100} + \frac{A_4 s + A_5}{s^2 + 300}$$

$$\bar{x}_2(s) = \frac{500}{s(s^2 + 300)(s^2 + 100)} = \frac{B_1}{s} + \frac{B_2 s + B_3}{s^2 + 100} + \frac{B_4 s + B_5}{s^2 + 300}$$

We can find $A_1, A_2, \dots, B_1, B_2, \dots$ (partial fractions method).

This leads to

$$\bar{x}_1(s) = \frac{1}{30s} - \frac{s}{40(s^2 + 100)} - \frac{s}{120(s^2 + 300)} \quad \dots (E_9)$$

$$\bar{x}_2(s) = \frac{1}{60s} - \frac{s}{40(s^2 + 100)} + \frac{s}{120(s^2 + 300)} \quad \dots (E_{10})$$

Inverse Laplace transforms of (E_9) and (E_{10}) give

$$x_1(t) = \left(\frac{1}{30} - \frac{1}{40} \cos 10t - \frac{1}{120} \cos 10\sqrt{3}t \right) u(t)$$

$$x_2(t) = \left(\frac{1}{60} - \frac{1}{40} \cos 10t + \frac{1}{120} \cos 10\sqrt{3}t \right) u(t)$$

It is to be noted that $x_1(t) = \frac{1}{30}$ meter and $x_2(t) = \frac{1}{60}$ meter are the static deflections associated with 5 N static force applied to mass m_1 . $\omega_1 = 10$ rad/s and $\omega_2 = 10\sqrt{3}$ rad/s are the two resonant frequencies associated with the two degree of freedom system.

5.53

Equivalent mass of cylinder with respect to $x_2 = (m_2)_{eq} = m_2 + \frac{J_0}{r^2}$

Equations of motion: $m_1 \ddot{x}_1 = -k(x_1 - x_2)$

$$(m_2)_{eq} \ddot{x}_2 = -k(x_2 - x_1)$$

i.e. $m_1 \ddot{x}_1 + kx_1 - kx_2 = 0 \quad \dots (E_1)$

$$\left(m_2 + \frac{J_0}{r^2} \right) \ddot{x}_2 + kx_2 - kx_1 = 0 \quad \dots (E_2)$$

Assuming $x_i(t) = X_i \cos(\omega t + \phi)$; $i = 1, 2$, Eqs. (E_1) and (E_2) can be written as

$$(-m_1 \omega^2 + k) X_1 - k X_2 = 0$$

$$-k X_1 + (-\omega^2 \{ m_2 + \frac{J_0}{r^2} \} + k) X_2 = 0$$

Frequency equation is:

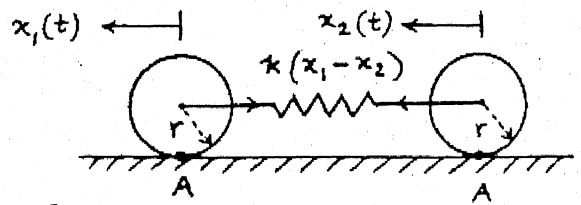
$$(-m_1 \omega^2 + k) (-\omega^2 m_2 - \omega^2 \frac{J_0}{r^2} + k) - k^2 = 0$$

or $\omega^4 \left(m_1 m_2 + \frac{m_1 J_0}{r^2} \right) - \omega^2 \left(m_1 k + m_2 k + \frac{k J_0}{r^2} \right) = 0$

$$\omega_1 = 0, \quad \omega_2 = \left\{ \left(m_1 k + m_2 k + \frac{k J_0}{r^2} \right) / \left(m_1 m_2 + \frac{m_1 J_0}{r^2} \right) \right\}^{1/2}$$

5.54 Equivalent mass of each cylinder for translatory motion, referred to point A, is

$$m_{eq} = \frac{J_A}{r^2} = \frac{\frac{mr^2}{2} + mr^2}{r^2} = \frac{3m}{2} = (m_1)_{eq} = (m_2)_{eq}$$



Equations of motion:

$$(m_1)_{eq} \ddot{x}_1 + k(x_1 - x_2) = 0$$

$$(m_2)_{eq} \ddot{x}_2 - k(x_1 - x_2) = 0$$

Frequency equation:

$$\begin{vmatrix} -(m_1)_{eq} \omega^2 + k & -k \\ -k & -(m_2)_{eq} \omega^2 + k \end{vmatrix} = 0$$

$$\text{or } (m_1)_{eq} (m_2)_{eq} \omega^4 - \omega^2 [(m_1)_{eq} k + (m_2)_{eq} k] = 0$$

$$\omega_1 = 0, \quad \omega_2 = \sqrt{\frac{(m_1)_{eq} k + (m_2)_{eq} k}{(m_1)_{eq} (m_2)_{eq}}} = \sqrt{\frac{4k}{3m}}$$

5.55 For harmonic motion $x_i(t) = X_i \cos(\omega t + \phi)$; $i = 1, 2$ given equations lead to

$$(-\omega^2 a_1 + b_1) X_1 + c_1 X_2 = 0$$

$$b_2 X_1 + (-\omega^2 a_2 + c_2) X_2 = 0$$

Frequency equation is

$$\begin{vmatrix} -\omega^2 a_1 + b_1 & c_1 \\ b_2 & -\omega^2 a_2 + c_2 \end{vmatrix} = 0$$

$$\text{or } \omega^4 (a_1 a_2) - \omega^2 (a_1 c_2 + b_1 a_2) + (b_1 c_2 - c_1 b_2) = 0$$

Condition for degeneracy is: $b_1 c_2 - c_1 b_2 = 0$

5.56 Equations of motion:

$$J_1 \ddot{\theta}_1 + k_t \theta_1 - k_t \theta_2 = 0$$

$$J_2 \ddot{\theta}_2 + k_t \theta_2 - k_t \theta_1 = 0$$

For $\theta_i(t) = \Theta_i \cos(\omega t + \phi)$; $i = 1, 2$,

$$\begin{bmatrix} -\omega^2 J_1 + k_t & -k_t \\ -k_t & -\omega^2 J_2 + k_t \end{bmatrix} \begin{Bmatrix} \Theta_1 \\ \Theta_2 \end{Bmatrix} = \begin{Bmatrix} 0 \\ 0 \end{Bmatrix}$$

Frequency equation is

$$\omega^4 (J_1 J_2) - \omega^2 (J_1 k_t + J_2 k_t) = 0$$

$$\omega_1 = 0, \quad \omega_2 = \sqrt{\frac{k_t (J_1 + J_2)}{J_1 J_2}}$$

Amplitude ratios:

$$r_1 = \frac{\Theta_2^{(1)}}{\Theta_1^{(1)}} = \frac{-\omega_1^2 J_1 + k_t}{k_t} = 1$$

$$r_2 = \frac{\Theta_2^{(2)}}{\Theta_1^{(2)}} = \frac{-\omega_2^2 J_1 + k_t}{k_t} = -\frac{J_1}{J_2}$$

General solution is given by equations similar to Eqs. (5.15). With $\dot{\theta}_1(0) = \dot{\theta}_2(0) = 0$, we obtain from equations similar to Eqs. (5.18):

$$\begin{aligned}\Theta_1^{(1)} &= \frac{1}{r_2 - r_1} \{r_2 \theta_1(0) - \theta_2(0)\} = -\left(\frac{J_2}{J_1 + J_2}\right) \left[-\frac{J_1}{J_2} \theta_1(0) - \theta_2(0)\right] \\ &= \left\{ \frac{J_1 \theta_1(0) + J_2 \theta_2(0)}{J_1 + J_2} \right\}\end{aligned}$$

$$\begin{aligned}\Theta_1^{(2)} &= \frac{1}{r_2 - r_1} \{-r_1 \theta_1(0) + \theta_2(0)\} = -\left(\frac{J_2}{J_1 + J_2}\right) \left[\frac{J_1}{J_2} \theta_1(0) + \theta_2(0)\right] \\ &= -\left\{ \frac{J_1 \theta_1(0) + J_2 \theta_2(0)}{J_1 + J_2} \right\}\end{aligned}$$

$$\phi_1 = \phi_2 = 0$$

$$\theta_1(t) = \Theta_1^{(1)} \cos \omega_1 t + \Theta_1^{(2)} \cos \omega_2 t = \Theta_1^{(1)} + \Theta_1^{(2)} \cos \omega_2 t$$

$$\theta_2(t) = \Theta_1^{(1)} - \frac{J_1}{J_2} \Theta_1^{(2)} \cos \omega_2 t$$

5.57 When $k_{t1} = 0$, the system becomes identical to the system of problem 5.56 with $k_t = k_{t1}$. Normal modes are given by

$$\vec{\Theta}^{(1)} = \begin{Bmatrix} \Theta_1^{(1)} \\ \Theta_2^{(1)} \end{Bmatrix} = \begin{Bmatrix} 1 \\ 1 \end{Bmatrix} \Theta_1^{(1)} ; \quad \vec{\Theta}^{(2)} = \begin{Bmatrix} \Theta_1^{(2)} \\ \Theta_2^{(2)} \end{Bmatrix} = \begin{Bmatrix} 1 \\ -\left(\frac{J_1}{J_2}\right) \end{Bmatrix} \Theta_1^{(2)}$$

Equations of motion can be rewritten as

$$\ddot{\theta}_1 + \frac{k_t}{J_1} (\theta_1 - \theta_2) = 0 \quad \text{----- (E}_1\text{)}$$

$$\ddot{\theta}_2 - \frac{k_t}{J_2} (\theta_1 - \theta_2) = 0 \quad \text{----- (E}_2\text{)}$$

Subtracting (E₂) from (E₁) gives

$$(\ddot{\theta}_1 - \ddot{\theta}_2) + (\theta_1 - \theta_2) \left(\frac{k_t}{J_1} + \frac{k_t}{J_2}\right) = 0 \quad \text{----- (E}_3\text{)}$$

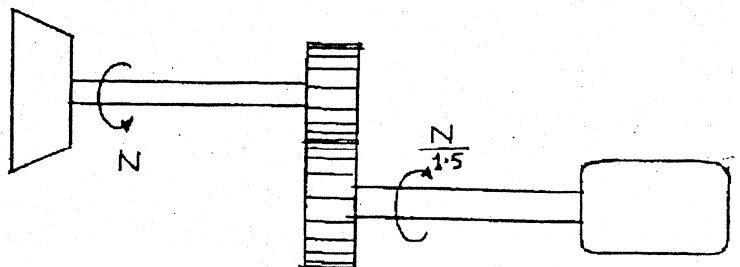
Defining $\alpha = \theta_1 - \theta_2$, (E₃) can be written as

$$\ddot{\alpha} + \left(\frac{k_t}{J_1} + \frac{k_t}{J_2}\right) \alpha = 0 \quad \text{----- (E}_4\text{)}$$

This is a single equation for which the natural frequency is

$$\omega = \sqrt{\left(\frac{k_t}{J_1} + \frac{k_t}{J_2}\right)} = \sqrt{\frac{k_t (J_1 + J_2)}{J_1 J_2}} \equiv \omega_2 \text{ of problem 5.45.}$$

5.58



Since the length of shaft 1 is small and its diameter large, it will be very rigid and hence the turbine and gear 1 are assumed to be rigidly connected. This helps in modeling the system as a two d.o.f. system.

$$J_{01} = J_{\text{turbine}} + J_{\text{gear1}} + \frac{J_{\text{gear2}}}{1.5^2} = 3000 + 500 + (1000/2.25) = 3944.4444 \text{ kg-m}^2$$

$$k_{t2} = \left(\frac{GJ}{\ell} \right)_{\text{shaft2}} = \frac{(80 (10^9)) \left(\frac{\pi}{32} (0.1^4) \right)}{1} = 7.854 (10^5) \text{ N/m}$$

$$J_{02} = J_{\text{generator}} = 2000 \text{ kg-m}^2$$

System is a semi-definite system. Its natural frequencies are given by (see Eq. (5.40)):

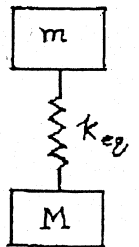
$$\omega_1 = 0$$

$$\omega_2 = \sqrt{\frac{k_{t2} (J_{01} + J_{02})}{J_{01} J_{02}}} = \sqrt{\frac{(78.54 (10^4)) (5944.4444)}{(3944.4444) (2000)}} = 24.3273 \text{ rad/sec}$$

5.59 Natural frequencies are given by Eq. (5.40):

$$\omega_1 = 0 ; \omega_2 = \sqrt{\frac{k (m_1 + m_2)}{m_1 m_2}} = \sqrt{\frac{6 k (m + M)}{m M}}$$

Assumption: Balloon is a point mass.



$$k_{eq} = 12 k \cos^2 45^\circ = 6 k$$

5.60 Equations of motion:

$$J_1 \ddot{\theta}_1 + c_{t1} \dot{\theta}_1 - c_{t2} (\dot{\theta}_2 - \dot{\theta}_1) + k_{t1} \theta_1 - k_{t2} (\theta_2 - \theta_1) = 0$$

$$J_2 \ddot{\theta}_2 + c_{t2} (\dot{\theta}_2 - \dot{\theta}_1) + k_{t2} (\theta_2 - \theta_1) = 0$$

i.e.,

$$\begin{bmatrix} J_1 & 0 \\ 0 & J_2 \end{bmatrix} \begin{Bmatrix} \ddot{\theta}_1 \\ \ddot{\theta}_2 \end{Bmatrix} + \begin{bmatrix} c_{t1} + c_{t2} & -c_{t2} \\ -c_{t2} & c_{t2} \end{bmatrix} \begin{Bmatrix} \dot{\theta}_1 \\ \dot{\theta}_2 \end{Bmatrix} + \begin{bmatrix} k_{t1} + k_{t2} & -k_{t2} \\ -k_{t2} & k_{t2} \end{bmatrix} \begin{Bmatrix} \theta_1 \\ \theta_2 \end{Bmatrix} = \begin{Bmatrix} 0 \\ 0 \end{Bmatrix}$$

Let $\theta_j(t) = X_j e^{st}$

Eqs. (E₁) yield:

$$\left(\begin{bmatrix} J_1 s^2 & 0 \\ 0 & J_2 s^2 \end{bmatrix} + \begin{bmatrix} (c_{t1} + c_{t2})s & -c_{t2}s \\ -c_{t2}s & c_{t2}s \end{bmatrix} + \begin{bmatrix} (k_{t1} + k_{t2}) & -k_{t2} \\ -k_{t2} & k_{t2} \end{bmatrix} \right) \begin{Bmatrix} X_1 \\ X_2 \end{Bmatrix} e^{st} = \begin{Bmatrix} 0 \\ 0 \end{Bmatrix} \quad \text{--- (E}_3\text{)}$$

The characteristic equation becomes:

$$\begin{vmatrix} J_1 s^2 + (c_{t1} + c_{t2}) s + k_{t1} + k_{t2} & -(c_{t2} s + k_{t2}) \\ -(c_{t2} s + k_{t2}) & J_2 s^2 + c_{t2} s + k_{t2} \end{vmatrix} = 0$$

i.e.,

$$a_0 s^4 + a_1 s^3 + a_2 s^2 + a_3 s + a_4 = 0 \quad \dots (E_4)$$

where

$$a_0 = J_1 J_2$$

$$a_1 = J_1 c_{t2} + J_2 (c_{t1} + c_{t2})$$

$$a_2 = J_1 k_{t2} + c_{t2} (c_{t1} + c_{t2}) + J_2 (k_{t1} + k_{t2}) - c_{t2}^2$$

$$a_3 = k_{t2} (c_{t1} + c_{t2}) + c_{t2} (k_{t1} + k_{t2}) - 2 c_{t2} k_{t2}$$

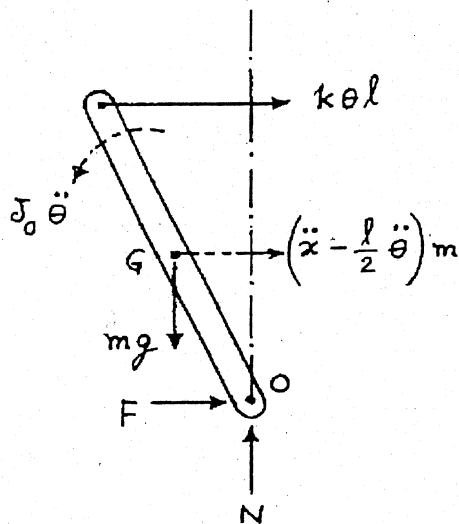
$$a_4 = k_{t2} (k_{t1} + k_{t2}) - k_{t2}^2$$

For the stability of the system, the conditions derived in section 5.8 are applicable:

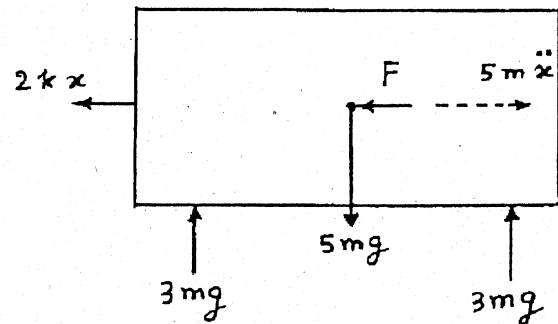
$$a_i > 0 \quad ; \quad i = 0, 1, 2, 3, 4$$

$$a_1 a_2 a_3 - a_1^2 a_4 - a_0 a_3^2 > 0$$

5.61



Free body diagram of bar



Free body diagram of trailer

Equations of motion of bar:

$$m \left(\ddot{x} - \frac{\ell}{2} \ddot{\theta} \right) = k \theta \ell + F \quad (1)$$

$$J_0 \ddot{\theta} - m \left(\ddot{x} - \frac{\ell}{2} \ddot{\theta} \right) \frac{\ell}{2} = -k \theta \ell (\ell) + m g \frac{\ell}{2} \sin \theta \quad (2)$$

Equation of motion of trailer:

$$5 m \ddot{x} = -F - 2 k x \quad \text{or} \quad F = -2 k x - 5 m \ddot{x} \quad (3)$$

Equations (1) and (2) can be rewritten as:

$$m \left(\ddot{x} - \frac{\ell}{2} \ddot{\theta} \right) - k \theta \ell + 2 k x + 5 m \ddot{x} = 0 \quad (5)$$

$$J_0 \ddot{\theta} - \frac{m \ell}{2} \left(\ddot{x} - \frac{\ell}{2} \ddot{\theta} \right) + k \theta \ell^2 - \frac{m g \ell \theta}{2} = 0 \quad (6)$$

$$\text{where } J_0 = \frac{1}{3} m \ell^2 \quad (7)$$

Equations (5) and (6) can be expressed in matrix form as:

$$\begin{bmatrix} 6 m & -\frac{m \ell}{2} \\ -\frac{m \ell}{2} & \frac{7}{12} m \ell^2 \end{bmatrix} \begin{bmatrix} \ddot{x} \\ \ddot{\theta} \end{bmatrix} + \begin{bmatrix} 2 k & -k \ell \\ 0 & (k \ell^2 - \frac{1}{2} m g \ell) \end{bmatrix} \begin{bmatrix} x \\ \theta \end{bmatrix} = \begin{bmatrix} 0 \\ 0 \end{bmatrix} \quad (8)$$

Assuming a solution of the form:

$$x(t) = X e^{st} \text{ and } \theta(t) = \Theta e^{st} \quad (9)$$

Eq. (8) can be expressed as:

$$\left[s^2 \begin{bmatrix} 6 m & -\frac{m \ell}{2} \\ -\frac{m \ell}{2} & \frac{m \ell^2}{3} \end{bmatrix} + \begin{bmatrix} 2 k & -k \ell \\ 0 & -\left(\frac{m g \ell}{2} - k \ell^2 \right) \end{bmatrix} \right] \begin{bmatrix} X \\ \Theta \end{bmatrix} e^{st} = \begin{bmatrix} 0 \\ 0 \end{bmatrix} \quad (10)$$

By setting the determinant of the coefficient matrix in Eq. (10) equal to zero, we obtain:

$$\begin{vmatrix} (6 m s^2 + 2 k) & -\left(\frac{m \ell s^2}{2} + k \ell \right) \\ -\left(\frac{m \ell s^2}{2} \right) & \left(\frac{m \ell^2 s^2}{3} - \frac{m g \ell}{2} + k \ell^2 \right) \end{vmatrix} = 0 \quad (11)$$

which, upon expansion, gives:

$$\left(\frac{7}{4} m^2 \ell^2 \right) s^4 + \left(\frac{37}{6} m k \ell^2 - 3 m^2 g \ell \right) s^2 + \left(-m k g \ell + 2 k^2 \ell^2 \right) = 0 \quad (12)$$

A comparison of Eq. (12) with Eq. (5.43) gives:

$$\begin{aligned} a_0 &= \frac{7}{4} m^2 \ell^2 \\ a_1 &= 0 \\ a_2 &= \frac{37}{6} m k \ell^2 - 3 m^2 g \ell \\ a_3 &= 0 \\ a_4 &= 2 k^2 \ell^2 - m k g \ell \end{aligned}$$

Conditions for the stability of the system:

1. All coefficients a_i must be positive:

$$a_2 \geq 0 \text{ or } k \geq \frac{18}{37} \frac{m g}{\ell}$$

$$a_4 \geq 0 \text{ or } k \geq \frac{1}{2} \frac{m g}{\ell}$$

2.

$$a_1 a_2 a_3 > a_0 a_3^2 + a_4 a_1^2$$

This is not applicable since both sides of the inequality are zero.

Thus the condition for stability is: $k \geq \frac{1}{2} \frac{m g}{\ell}$.

5.62

Equations of motion are (Eqs. (5.1) and (5.2))

$$2m \ddot{x}_1 + 3k x_1 - 2k x_2 = F_1(t)$$

$$m \ddot{x}_2 - 2k x_1 + 3k x_2 = 0$$

Hence $[m] = \begin{bmatrix} 2m & 0 \\ 0 & m \end{bmatrix} = \begin{bmatrix} 20 & 0 \\ 0 & 10 \end{bmatrix}$, $[k] = \begin{bmatrix} 3k & -2k \\ -2k & 3k \end{bmatrix} = \begin{bmatrix} 6000 & -4000 \\ -4000 & 6000 \end{bmatrix}$,

$$\vec{F} = \begin{Bmatrix} F_1(t) \\ 0 \end{Bmatrix}$$

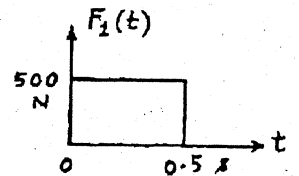
Frequency equation is $[-\omega^2 [m] + [k]] = \omega^4 - 900 \omega^2 + 100000 = 0$

Hence $\omega_1 = 11.3949 \text{ rad/s}$, $\omega_2 = 27.7517 \text{ rad/s}$

and $\tau_1 = 0.5514 \text{ s}$, $\tau_2 = 0.2264 \text{ s}$.

We select $\Delta t = 0.02 \text{ s}$ and use central difference method for numerical solution (see chapter 11 for details).

The main program which calls CDIFF, the subroutine EXTFUN and the output are given below.



```

C =====
C
C PROGRAM
C MAIN PROGRAM WHICH CALLS CDIFF
C
C =====
C FOLLOWING 10 LINES CONTAIN PROBLEM-DEPENDENT DATA
  PEAL M(2,2),K(2,2),MC(2,2),MK(2,2),MCI(2,2),MMC(2,2)
  DIMENSION C(2,2),XI(2),XDI(2),XDD1(2),XM1(2),F(2),R(2),RR(2),
  2  XMK(2),XMI(2),XM2(2),XPI(2),ZA(2),ZB(2),ZC(2),LA(2),LB(2,2),
  3  S(2),X(50,2),XD(50,2),XDD(50,2)
  DATA N,NSIEP,NSTEP1,DELT/2,49,50,0.02/

  DATA XI/0.0,0.0/
  DATA XDI/0.0,0.0/
  DATA M/20.0,0.0,0.0,10.0/
  DATA C/0.0,0.0,0.0,0.0/
  DATA K/6000.0,-4000.0,-4000.0,6000.0/
C END OF PROBLEM-DEPENDENT DATA
  CALL CDIFF (M,C,K,XI,XDI,XDD1,N,NSTEP,DELT,F,R,RR,XM1,XM2,XPI,
  2  MC,MK,MCI,XMK,M'C,XMI,ZA,ZB,ZC,LA,LB,S,X,XD,XDD,NSTEP1)

```

```

WRITE (13,10)
10  FORMAT (//,38H SOLUTION BY CENTRAL DIFFERENCE METHOD,/)
    WRITE (13,20) N,NSTEP,DELT
20  FORMAT (12H GIVEN DATA:,,/ ,3H N=,15,4X,7H NSTEP=,15,4X,6H DELT=,
2    E15.8,/)
    WRITE (13,30)
30  FORMAT (10H SOLUTION:,,/ ,5H STEP,3X,5H TIME,3X,7H X(I,1),3X,
2    8H XD(I,1),2X,9H XDD(I,1),4X,7H X(I,2),3X,8H XD(I,2),2X,
3    9H XDD(I,2),/)
    DO 40, I=1,NSTEP1
    TIME=REAL(I-1)*DELT
40  WRITE (13,50) I,TIME,X(I,1),XD(I,1),XDD(I,1),X(I,2),XD(I,2),XDD(
2    I,2)
50  FORMAT (1X,I4,FR.4,6(1X,E10.4))
    STOP
END

```

```

C =====
C
C SUBROUTINE EXTFUN
C THIS SUBROUTINE IS PROBLEM-DEPENDENT
C
C =====
      SUBROUTINE EXTFUN (F,TIME,N)
      DIMENSION F(N)
      F(1)=0.0
      F(2)=0.0
      IF (TIME .LE. 0.5) F(1)=500.0
      RETURN
      END

```

SOLUTION BY CENTRAL DIFFERENCE METHOD

GIVEN DATA:

N= 2 NSTEP= 49 DELT= 0.20000000E-01

SOLUTION:

STEP	TIME	X(I,1)	XD(I,1)	XDD(I,1)	X(I,2)	XD(I,2)	XDD(I,2)
1	0.0000	0.0000E+00	0.0000E+00	0.2500E+02	0.0000E+00	0.0000E+00	0.0000E+00
2	0.0200	0.5000E-02	0.0000E+00	0.2500E+02	0.0000E+00	0.0000E+00	0.0000E+00
3	0.0400	0.1940E-01	0.4850E+00	0.2350E+02	0.8000E-03	0.2000E-01	0.2000E+01
4	0.0600	0.4154E-01	0.9134E+00	0.1934E+02	0.4512E-02	0.1128E+00	0.7280E+01
5	0.0800	0.6905E-01	0.1241E+01	0.1344E+02	0.1379E-01	0.3247E+00	0.1391E+02
6	0.1000	0.9938E-01	0.1446E+01	0.7043E+01	0.3080E-01	0.6572E+00	0.1935E+02
7	0.1200	0.1302E+00	0.1530E+01	0.1347E+01	0.5632E-01	0.1063E+01	0.2127E+02
8	0.1400	0.1600E+00	0.1515E+01	-0.2810E+01	0.8917E-01	0.1459E+01	0.1831E+02
9	0.1600	0.1877E+00	0.1436E+01	-0.5164E+01	0.1262E+00	0.1747E+01	0.1050E+02
10	0.1800	0.2129E+00	0.1323E+01	-0.6059E+01	0.1630E+00	0.1846E+01	-0.6577E+00
	:						
46	0.9000	0.2345E+00	-0.1023E+01	-0.8737E+01	0.1991E+00	-0.5925E+00	-0.2714E+02
47	0.9200	0.2101E+00	-0.1165E+01	-0.5533E+01	0.1715E+00	-0.1120E+01	-0.2565E+02
48	0.9400	0.1842E+00	-0.1258E+01	-0.3717E+01	0.1365E+00	-0.1566E+01	-0.1889E+02
49	0.9600	0.1571E+00	-0.1325E+01	-0.2966E+01	0.9808E-01	-0.1837E+01	-0.8195E+01
50	0.9800	0.1290E+00	-0.1379E+01	-0.2515E+01	0.6131E-01	-0.1879E+01	0.3993E+01

5.63 (a) Frequency equation is

$$|-\omega^2 [m] + [k]| = \begin{vmatrix} -\omega^2 [0.2 & 0 \\ 0 & 0.2] + \begin{bmatrix} 36 & -18 \\ -18 & 18 \end{bmatrix} \end{vmatrix} = \omega^4 - 270\omega^2 + 8100 = 0$$

```

C =====
C
C PROGRAM B
C MAIN PROGRAM FOR CALLING THE SUBROUTINE QUART
C
C =====
C SOLUTION OF: A(1)*(X**4)+A(2)*(X**3)+A(3)*(X**2)+A(4)*X+A(5)=0
      DIMENSION A(5),RR(4),R1(4)
C FOLLOWING LINE CONTAINS PROBLEM-DEPENDENT DATA
      DATA A/1.0,0.0,-270.0,0.0,8100.0/
C END OF PROBLEM-DEPENDENT DATA
      WRITE (26,10) (A(I),I=1,5)
10    FORMAT (//,31H SOLUTION OF A QUARTIC EQUATION,//,6H DATA://,
2     74 A(1) =,E15.6,/,7H A(2) =,E15.6,/,7H A(3) =,E15.6,/,
3     7H A(4) =,E15.6,/,7H A(5) =,E15.6,/)
      CALL QUART (A,RR,R1)
      WRITE (26,20)
20    FORMAT (/,7H ROOTS://,9H ROOT NO.,3X,10H REAL PART,5X,
2     15H IMAGINARY PART,/)
      DO 30 I=1,4
30    WRITE (26,40) I,RR(I),R1(I)
40    FORMAT (I5,3X,E15.6,3X,E15.6)
      STOP
      END
  
```

SOLUTION OF A QUARTIC EQUATION

DATA:

A(1) = 0.100000E+01
 A(2) = 0.000000E+00
 A(3) = -0.270000E+03
 A(4) = 0.000000E+00
 A(5) = 0.810000E+04

ROOTS:

ROOT NO.	REAL PART	IMAGINARY PART
1	-0.153500E+02	0.000000E+00
2	-0.586319E+01	0.000000E+00
3	0.586319E+01	0.000000E+00
4	0.153500E+02	0.000000E+00

(b) $(-0.2 \omega_j^2 + 36) X_j^{(1)} - 18 X_j^{(2)} = 0 ; j = 1, 2$
 Writing $X_j^{(2)} = \left(\frac{-0.2 \omega_j^2 + 36}{18} \right) X_j^{(1)} \equiv r_j X_j^{(1)}$,

$$r_1 = \{-0.2 (5.86319)^2 + 36\} / 18 = 1.6180334$$

$$r_2 = \{-0.2 (15.35)^2 + 36\} / 18 = -0.6180278$$

Eqs. (5.18) give $X_1^{(1)} = 1.44722$, $X_1^{(2)} = 0.55279$, $\phi_1 = \phi_2 = 0$

Displacements of masses m_1 and m_2 are given by Eqs. (5.15):

$$x_1(t) = 1.44722 \cos(5.86319t) + 0.55279 \cos(15.35t)$$

$$x_2(t) = 2.34165 \cos(5.86319t) - 0.34164 \cos(15.35t)$$

5.64

```

C =====
C
C PROBLEM 5.64
C
C =====
      DIMENSION C(2,2),FZ(2)
      REAL K(2,2),M(2,2)
      COMPLEX Z(2,2),X(2),AA,BB,DEN
C INPUT DATA
      DATA A/0.1,0.0,0.0,0.1/
      DATA C/1.0,0.0,0.0,0.0/
      DATA K/40.0,-20.0,-20.0,20.0/
      DATA FZ/1.0,2.0/
      OMF=5.0
C END OF INPUT DATA
      DO 10 I=1,2
      DO 10 J=1,2
      A=- (OMF**2)*M(I,J)+K(I,J)
      B=OMF*C(I,J)
10    Z(I,J)=CMPLX(A,B)
      DEN=Z(1,1)*Z(2,2)-Z(1,2)*Z(2,1)
      AA=Z(2,2)*CMPLX(FZ(1),0.0)
      BB=Z(1,2)*CMPLX(FZ(2),0.0)
      X(1)=(AA-BB)/DEN
      AA=Z(1,1)*CMPLX(FZ(2),0.0)
      BB=Z(1,2)*CMPLX(FZ(1),0.0)
      X(2)=(AA-BB)/DEN
      PRINT 20, X(1),X(2)
20    FORMAT (//,2X,25H SOLUTION OF PROBLEM 5.49,//,2X,
      2 7H X(1) =,2E15.8,/,2X,7H X(2) =,2E15.8,/)
      PRINT 30, OMF
30    FORMAT (2X,6H OMF =,E15.8)
      STOP
      END

```

SOLUTION OF PROBLEM 5.64

X(1) = 0.20095898E+00-0.68620138E-01
 X(2) = 0.34395310E+00-0.78423016E-01

OMF = 0.50000000E+01

5.65

The system shown in Fig. A can be drawn in equivalent form as shown in Fig. B where both pulleys have the same radius, r_1 .

The equivalent mass moment of inertia of pulley 2 can be computed in different speed ratios as:

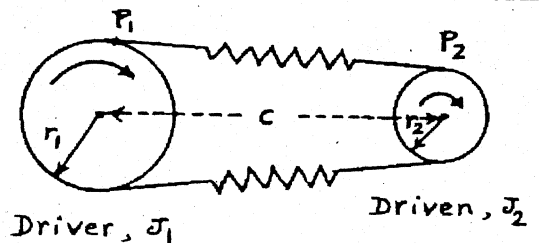
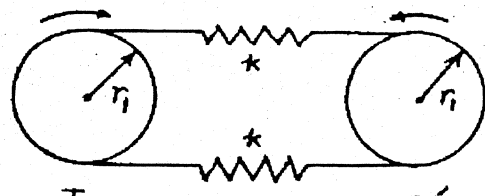


Fig. A



$$\begin{aligned}
 J_2' &= J_2 (\text{speed ratio})^2 \\
 &= J_2 \left(\frac{150}{350}\right)^2 ; J_2 \left(\frac{250}{350}\right)^2 ; \\
 &J_2 \left(\frac{450}{350}\right)^2 ; J_2 \left(\frac{750}{350}\right)^2
 \end{aligned}$$

or $J_2' = 0.1837 J_2 ; 0.5102 J_2 ; 1.6531 J_2 ; 4.5918 J_2$

Stiffness of the belt (on each side) is given by

$$k = \frac{AE}{l}$$

where A = cross-sectional area of belt, E = Young's modulus and l = length of the belt. Length of the belt (distance $P_1 P_2$ in Fig. A) is given by

$$l = \frac{1}{2} [4c^2 - (D-d)^2]^{\frac{1}{2}}$$

In this example, $c = 5 \text{ m}$, $D = 1 \text{ m}$, $d = 0.25 \text{ m}$ and hence

$$l = \frac{1}{2} [4(5)^2 - (1 - 0.25)^2]^{\frac{1}{2}} = 4.9859 \text{ m}$$

$$\therefore k = \frac{A(10^{10})}{4.9859} = 2.0057 \times 10^9 \text{ A N/m}$$

Equation of motion:

$$J_1 \ddot{\theta}_1 + k_t (\theta_1 + \theta_2) = 0 \Rightarrow J_1 \ddot{\theta}_1 + k_t \theta_1 \left(1 + \frac{J_1}{J_2'}\right) = 0$$

$$J_2 \ddot{\theta}_2 + k_t (\theta_1 + \theta_2) = 0 \Rightarrow J_2 \ddot{\theta}_2 + k_t \theta_2 \left(\frac{J_2'}{J_1} + 1\right) = 0$$

$$\therefore \omega_n = \sqrt{k_t \left(\frac{J_1 + J_2'}{J_1 J_2'}\right)}$$

where $k_t = 2k r_1^2$ (see solution of problem 2.51).

Here $J_1 = 0.1 \text{ kg-m}^2$ and $J_2 = 0.2 \text{ kg-m}^2$. In order for the natural frequency ω_n to be away from the speeds 150, 250, 350, 450 and 750 rpm { or, 15.708, 26.180, 36.652, 47.124 and 78.540 rad/sec },

$$\omega_n \leq 15.708 \text{ rad/sec}$$

$$\omega_n \geq 78.540 \text{ rad/sec}$$

Since ω_n involves A (through k_t), it can be determined from the above inequalities.

5.66

Velocity of tup before impact is given by:

$$\frac{1}{2} m_{\text{tup}} v^2 = m_{\text{tup}} g h \quad \text{or} \quad v = \sqrt{2 g h} = \sqrt{2 (9.81) (2)} = 6.2642 \text{ m/sec}$$

(a) Impact is inelastic:

Conservation of momentum leads to:

$$m_{\text{tup}} v_{\text{tup}} + m_{\text{anvil}} (0) = (m_{\text{tup}} + m_{\text{anvil}}) v_0$$

$$\text{or} \quad v_0 = \frac{(1000) (6.2642)}{(1000 + 5000)} = 1.0440 \text{ m/sec}$$

(b) Natural frequencies:

$$\omega_{2,1}^2 = \frac{k_1 + k_2}{2 m_1} + \frac{k_2}{2 m_2} \pm \sqrt{\frac{1}{4} \left[\frac{k_1 + k_2}{m_1} + \frac{k_2}{m_2} \right]^2 - \frac{k_1 k_2}{m_1 m_2}}$$

Thus the natural frequency requirement can be stated as:

$$f_1^2 = \frac{\omega_1^2}{(2\pi)^2}$$

$$= \frac{1}{(2\pi)^2} \left\{ \frac{k_1 + k_2}{50000} + \frac{k_2}{10000} - \sqrt{\frac{1}{4} \left[\frac{k_1 + k_2}{25000} + \frac{k_2}{5000} \right]^2 - \frac{k_1 k_2}{125 (10^8)}} \right\} > (5^2) \quad (1)$$

(c) Free vibration response:

Initial conditions:

$$x_1(0) = x_2(0) = \dot{x}_1(0) = 0, \quad \dot{x}_2(0) = v_0 = 1.0440 \text{ m/sec}$$

Maximum forces in the springs:

$$F_1 = k_1 x_1 |_{\text{max}} \quad (2)$$

$$F_2 = k_2 (x_2 - x_1) |_{\text{max}} \quad (3)$$

For a helical spring, the shear stress (τ) under an axial force F is given by:

$$\tau = k_s \frac{8 F D}{\pi d^3} \quad (4)$$

where k_s = shear stress correction factor = $\frac{2D + d}{2D}$, D = mean coil diameter, and d = wire diameter.

Ref: J. E. Shigley and C. R. Mischke, "Mechanical Engineering Design," 5th Ed., McGraw-Hill, New York, 1989.

Since stress is to be less than the yield stress with a factor of safety of 1.5, we have

$$\tau_1 \leq \frac{\tau_{\text{yield}}}{1.5} \quad (5)$$

$$\tau_2 \leq \frac{\tau_{\text{yield}}}{1.5} \quad (6)$$

where τ_1 and τ_2 denote the shear stresses induced in the springs k_1 and k_2 , respectively, and τ_{yield} is the shear stress corresponding to the yield stress of the material.

